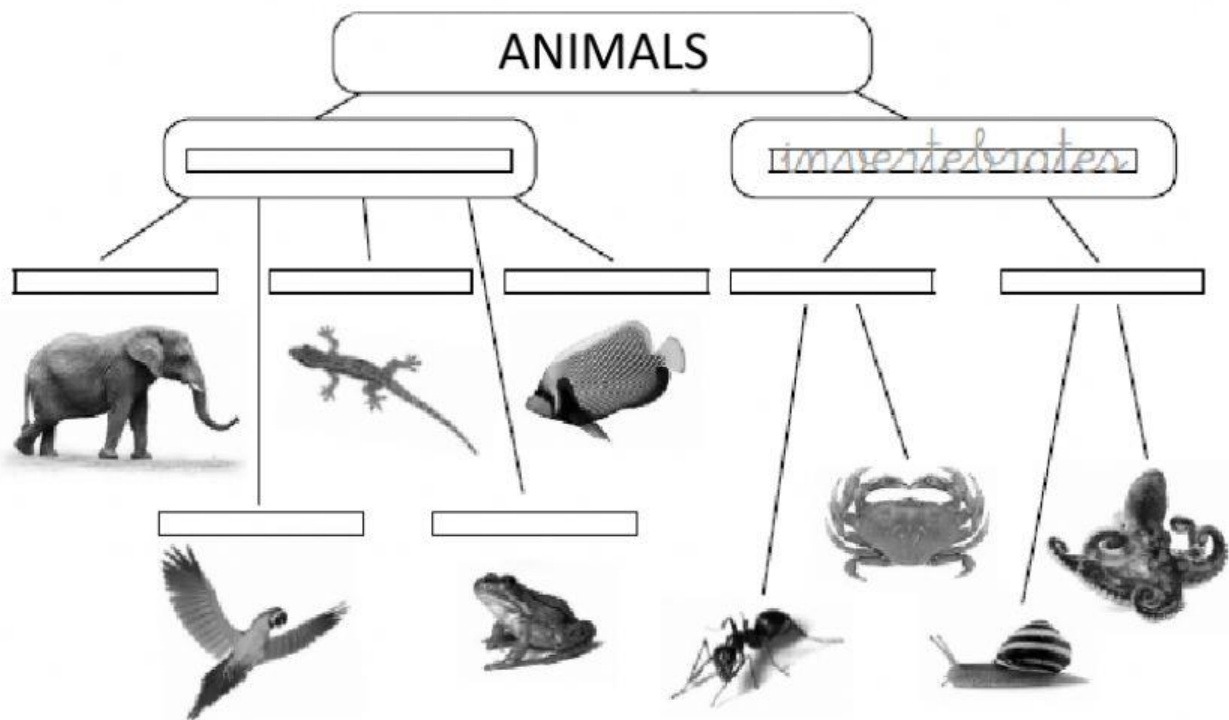


1 Complete the diagram.

animal kingdom mammals invertebrates reptiles fish
arthropods vertebrates molluscs birds amphibians



2 Circle the correct animal category.

They have gills, fins and scales.

reptiles / fish / molluscs

They have segmented bodies and an exoskeleton.

mammals / arthropods / amphibians

They have a beak and feathers.

fish / reptiles / birds

They have hair or fur and give milk to their babies.

mammals / arthropods / reptiles

They have soft bodies and no skeleton.

fish / molluscs / mammals

They breathe with gills and later with lungs.

fish / amphibians / reptiles

They have dry skin and scales.

molluscs / reptiles / fish

3 Circle the correct word.

Vertebrate / Invertebrate animals have a skeleton.

Vertebrate / Invertebrate animals do not have a skeleton.

4 Write the correct animal group.











mammals

birds

reptiles

amphibians







fish

fish				
				
				

5 Match.

Herbivores	eat animals.
Carnivores	eat animals and plants
Omnivores	eat plants.

6 Where do they live? Tick.

					
land <input type="checkbox"/>	land <input type="checkbox"/>	land <input type="checkbox"/>	land <input type="checkbox"/>	land <input type="checkbox"/>	land <input type="checkbox"/>
water <input checked="" type="checkbox"/>	water <input type="checkbox"/>	water <input type="checkbox"/>	water <input type="checkbox"/>	water <input type="checkbox"/>	water <input type="checkbox"/>