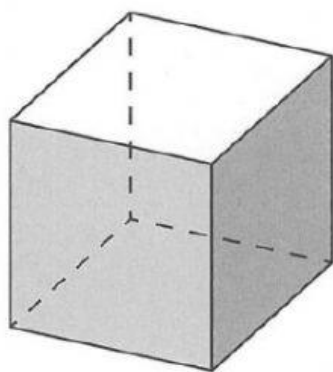


Name the shape and record the number of faces, edges and vertices.



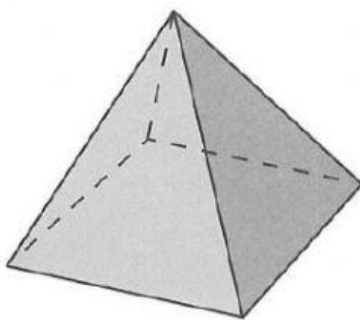
cube

Edges

Faces

Curved Faces

Vertices




Edges

Faces

Curved Faces

Vertices

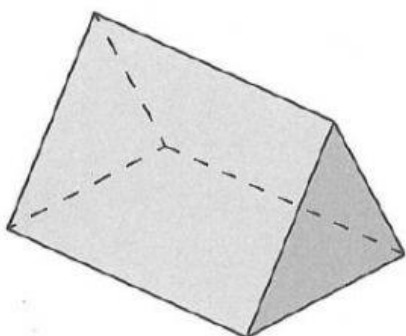


Edges

Faces

Curved Faces

Vertices

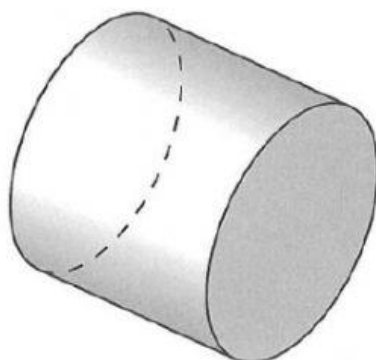


Edges

Faces

Curved Faces

Vertices

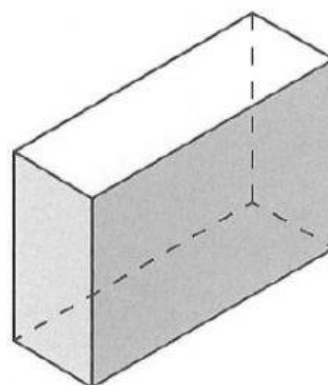


Edges

Faces

Curved Faces

Vertices

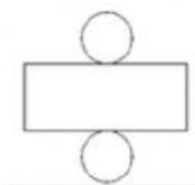


Edges

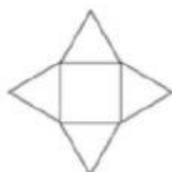
Faces

Curved Faces

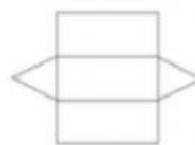
Vertices



This net will
fold to make a:



This net will
fold to make a:



This net will
fold to make a: