



Cambridge Primary Programme

Name: _____

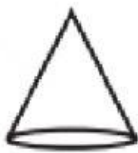
Date: _____

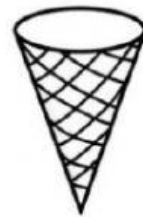
Class: _____

Part 1. Look at the shapes and write the correct words.

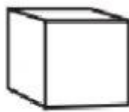
cuboid	cube	cone	triangular prism	pentagon
--------	------	------	------------------	----------



1.



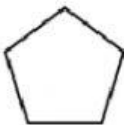


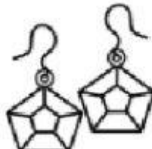
2.



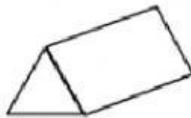


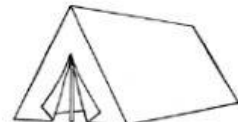
3.





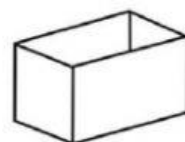
4.





5.





Part 2. Choose the correct answer.

1. Which holds the least?



A.



B.



C.

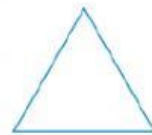
2. What's next?



A.



B.



C.

3. Which has the biggest capacity?



A.



B.



C.

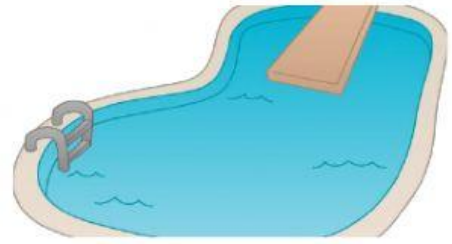
4. Which has the smallest capacity?



A.



B.



C.

5. Which holds the least?



A.

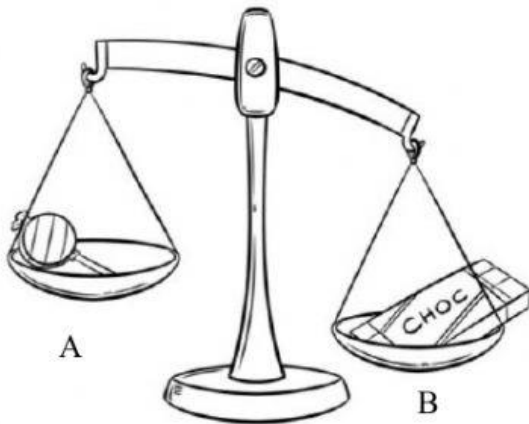


B.

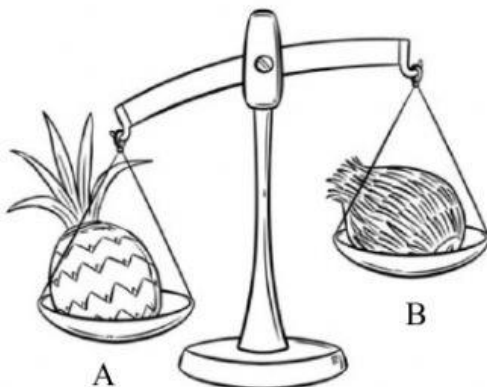


C.

6. Which is lighter?

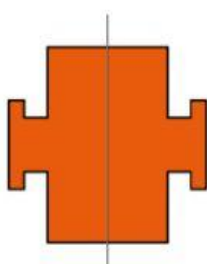



7. Which is heavier?



Part 3. Look and write Yes or No.

Is it symmetrical?

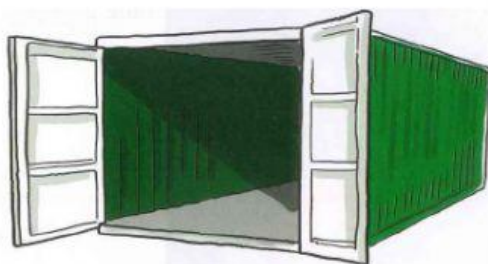



Part 4: Read and write 1, 2, 3, 4 under each picture.

1. Order the objects from the smallest capacity to the biggest capacity.




2. Order the objects from the biggest capacity to the smallest capacity.

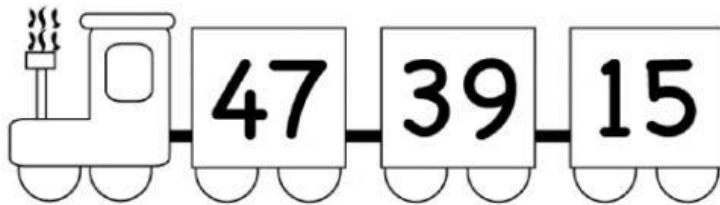


Part 5. Order the numbers.

a. From the biggest to the smallest

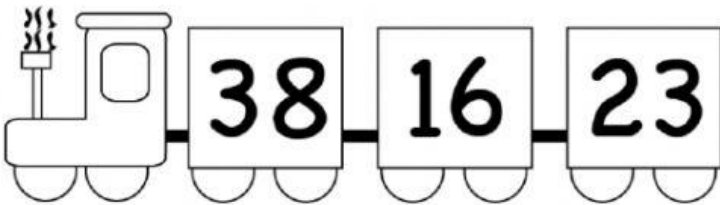


--	--	--




--	--	--

b. From the smallest to the biggest



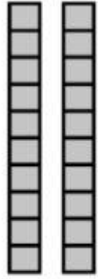
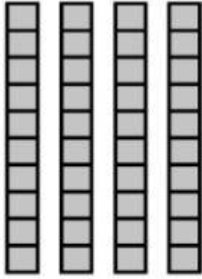


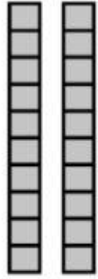
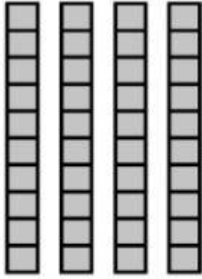


--	--	--



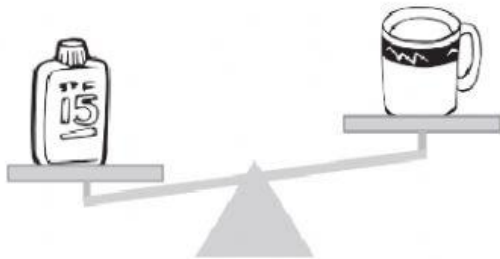
--	--	--

Part 6. What are these numbers?

 Tens <input type="text" value="6"/> Ones <input type="text" value="7"/> Number <input type="text" value="67"/>	 Tens <input type="text"/> Ones <input type="text"/> Number <input type="text"/>
---	---

<div style="display: flex; justify-content: space-around; align-items: center;"> <div style="text-align: center;">  <p>Tens <input style="width: 40px; height: 30px;" type="text"/></p> </div> <div style="text-align: center;">  <p>Tens <input style="width: 40px; height: 30px;" type="text"/></p> </div> </div> <div style="display: flex; justify-content: space-around; align-items: center; margin-top: 20px;"> <div style="text-align: center;">  <p>Ones <input style="width: 40px; height: 30px;" type="text"/></p> </div> <div style="text-align: center;">  <p>Ones <input style="width: 40px; height: 30px;" type="text"/></p> </div> </div> <div style="text-align: center; margin-top: 20px;"> <p>Number <input style="width: 60px; height: 30px;" type="text"/></p> </div>	<div style="display: flex; justify-content: space-around; align-items: center;"> <div style="text-align: center;">  <p>Tens <input style="width: 40px; height: 30px;" type="text"/></p> </div> <div style="text-align: center;">  <p>Tens <input style="width: 40px; height: 30px;" type="text"/></p> </div> </div> <div style="display: flex; justify-content: space-around; align-items: center; margin-top: 20px;"> <div style="text-align: center;">  <p>Ones <input style="width: 40px; height: 30px;" type="text"/></p> </div> <div style="text-align: center;">  <p>Ones <input style="width: 40px; height: 30px;" type="text"/></p> </div> </div> <div style="text-align: center; margin-top: 20px;"> <p>Number <input style="width: 60px; height: 30px;" type="text"/></p> </div>
---	---

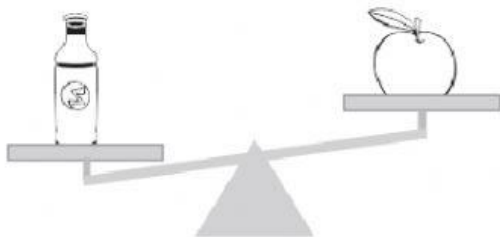
Part 7. Look, choose and write.



heavier

lighter

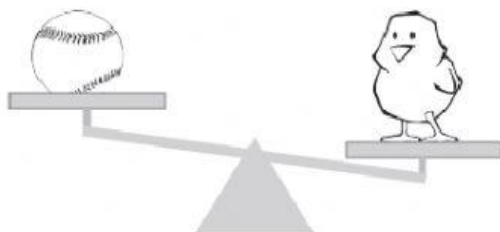
The bottle is _____ than the mug



heavier

lighter

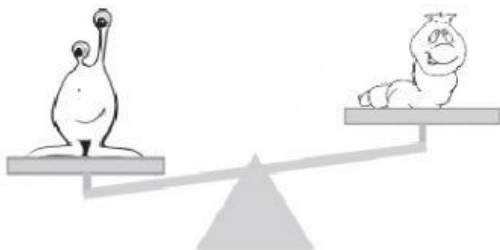
The apple is _____ than the bottle



heavier

lighter

The ball is _____ than the chick



heavier

lighter

The alien is _____ than the worm

Part 8. Read and fill in the blanks.

more	less
------	------

a 5 is _____ than 4.

b 6 is _____ than 8.

c 9 is _____ than 11.

d 13 is _____ than 15.

e 18 is _____ than 16.