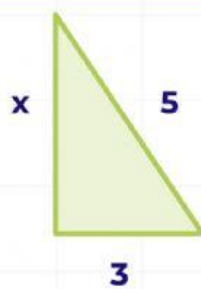
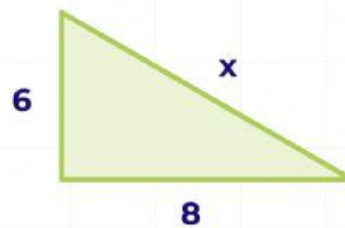


Calcula la longitud del lado que falta en cada uno de los segmentos de los siguientes triángulos rectángulos.



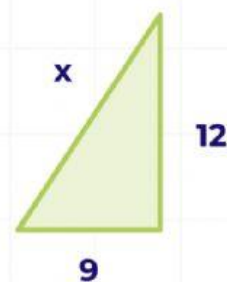
$x =$




$x =$



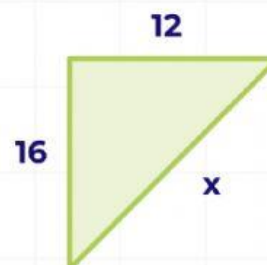
$x =$



$x =$



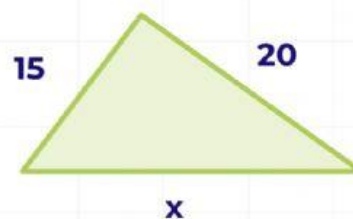
$x =$



$x =$



$x =$



$x =$