

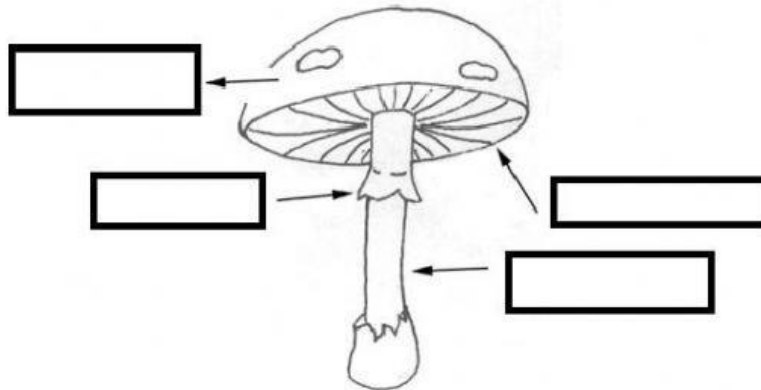


1. Complete the information about The Fungi kingdom.

| | | |
|---|---|---|
| |  |  |
| Which type of living thing can you see around... | | |
| Which kingdom does it belong to? | | |
| Is it unicellular or multicellular ? | | |
| Is it beneficial or harmful ? | | |

2. Label with the name of the parts of a mushroom.



-Why is so important to identify mushrooms correctly?

-Is a mushroom a fungus or is it only the visible part of a fungus?

3. Complete

Protists include two very different types of organisms: _____ and _____.

| | Multicellular | Unicellular | Live in aquatic environments | Make their own food | Feed on other organisms | Some can cause diseases | Are nutritious and used as fertilizer and to produce cosmetics. |
|----------|---------------|-------------|------------------------------|---------------------|-------------------------|-------------------------|---|
| Algae | x | x | | | | | |
| Protozoa | | x | | | | | |

4. Complete with information about bacteria. Use:

Helpful / monera / living things / feed on / make / smallest / air/ water / soil

Bacteria is included in _____ kingdom. Bacteria are the _____ and simplest living things.

Most bacteria _____ other organisms but some bacteria _____ their own food.

They can live in _____ , _____ , _____ or inside other _____

Bacteria can be _____ or harmful.

5. Match. Complete use: The Fungi kingdom, The Protista kingdom, The Monera Kingdom

A



MOULD

B



MUSHROOM

C



BACTERIA

D



ALGAE

E



FUNGUS
