

Congruent or similar



Identifying Similar and Congruent Shapes

Name: _____

Determine if the shapes shown are 'similar', 'congruent' or 'neither'.

1)



2)



3)



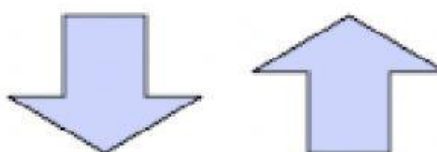
4)



5)



6)



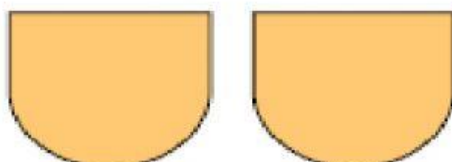
7)



8)



9)



10)




11)



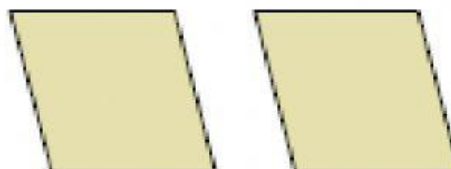
12)



13)



14)



15)



16)

