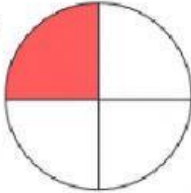


Fractions

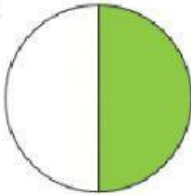
What fraction does the colored area show?
Color in the bubble next to the correct answer.

1.



- ☐ $\frac{1}{2}$ ☐ $\frac{3}{4}$ ☐ $\frac{1}{4}$ ☐ $\frac{1}{3}$

2.



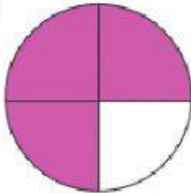
- ☐ $\frac{2}{3}$ ☐ $\frac{2}{4}$ ☐ $\frac{1}{4}$ ☐ $\frac{1}{2}$

3.



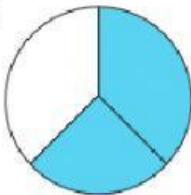
- ☐ $\frac{3}{4}$ ☐ $\frac{1}{2}$ ☐ $\frac{2}{3}$ ☐ $\frac{1}{3}$

4.



- ☐ $\frac{2}{4}$ ☐ $\frac{3}{4}$ ☐ $\frac{1}{3}$ ☐ $\frac{1}{4}$

5.



- ☐ $\frac{3}{4}$ ☐ $\frac{1}{3}$ ☐ $\frac{2}{4}$ ☐ $\frac{2}{3}$