

Name _____

Math - Probability

Let's Play Marbles

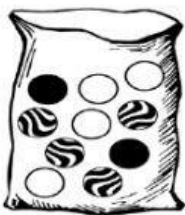
Directions: Identify the probability for each question.



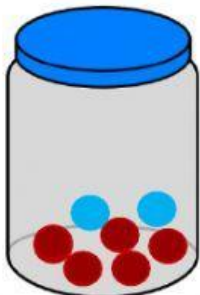
1. What is the probability of pulling a black marble out of the bag?



2. What is the probability of pulling a white marble out of the bag?




3. What is the probability of pulling a black and white marble out of the bag?



How likely are you to grab a ?

More likely

Less likely



How likely are you to grab a ?

More likely

Less likely