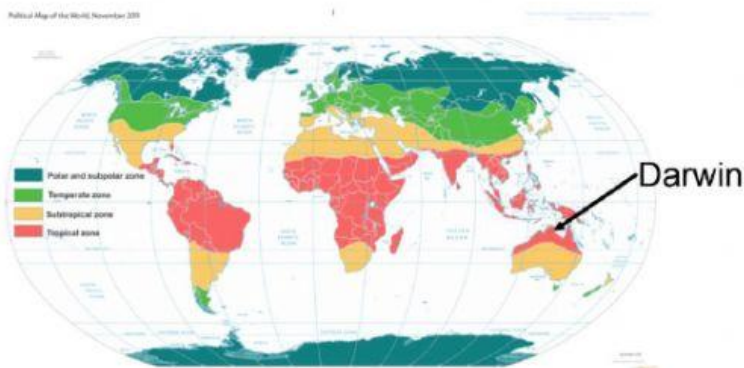
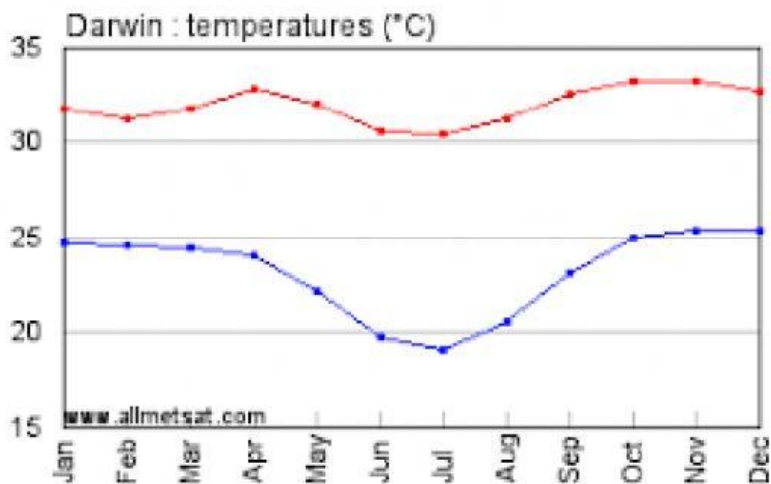


## Reading 2 Category Line Graphs



What is the average maximum temperature in February? °C

What is the average maximum temperature in October? °C

What is the average minimum temperature in February? °C

What is the average minimum temperature in July? °C

What are the hottest months in Darwin? October and

Which graph is constant? (mark the correct answer with an x)

a/ Average Daytime Temperatures

b/ Average Night-time Temperatures

### Making Connections

Because Darwin is in the region it is all year around.

Because of its climate, people in Darwin wear

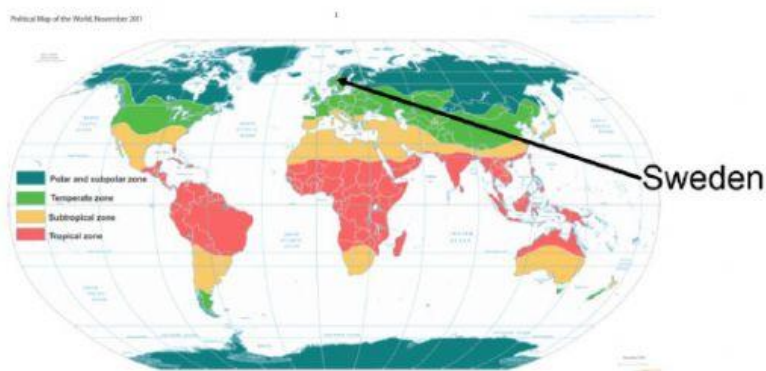
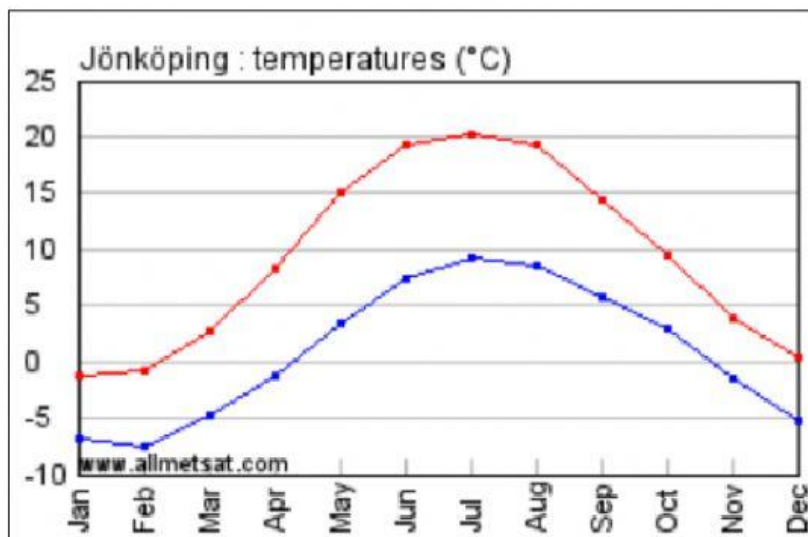
Darwin is hot all year round. As a result, is a popular sport.

Darwin is located by the sea. As a result many people like to

Darwin is located by the sea so many people like to eat

Cherries are grown in cool temperate climates like those in Tasmania. Mangoes grow well in hot climates that get lots of rain in spring. As a result, are a popular crop grown by farmers near Darwin.

Because of it's climate, is not a popular sport in Darwin.



What is the average maximum temperature in February?      °C

What is the average maximum temperature in October?      °C

June, July and August are the                      months in Sweden. SUMMER AUTUMN WINTER or SPRING

December, January and February are the                      months in Sweden. SUMMER AUTUMN WINTER or SPRING

Both graphs show that Sweden has a                      climate. CONSTANT or VARIABLE

### Making Connections

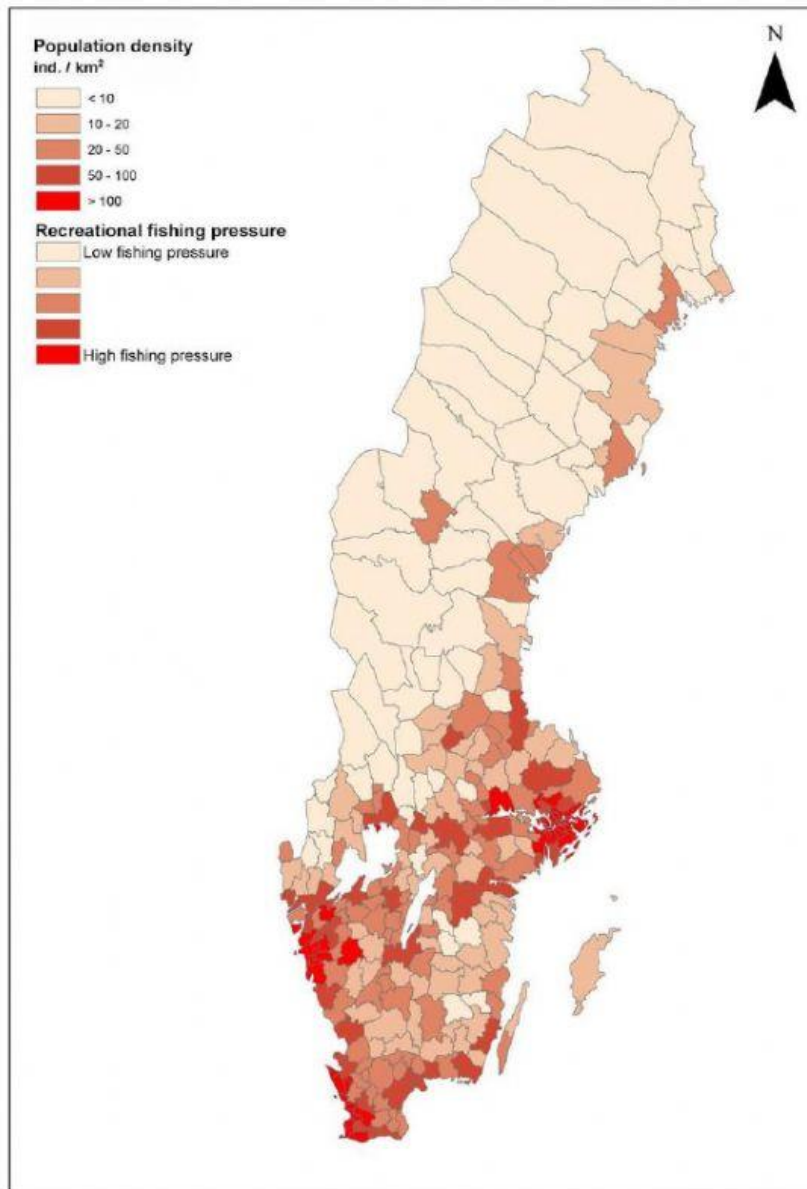
Because Sweden is in the                      region it has      seasons.

Because Sweden is close to the arctic circle it has a                      climate. This means it has a long winter and has a short summer.

Sweden is very cold in winter. As a result,                      is a popular sport.

Sweden is located by the sea. As a result                      is an important part of peoples diets.

Because Sweden is so cold and does not get a lot of direct sunlight it is a difficult place to grow



## Population Density Map

### Interconnections (Making Connections)

Sweden is in the temperate climate zone. However, it is sub-arctic and the north of the country is in the arctic region. As a result, most people prefer to live in the \_\_\_\_\_ of the country as it is \_\_\_\_\_ and the climate is not as harsh.

People also choose to live:

a/ near the coast

b/ inland

Mark the correct answer with a X

Sweden is a peninsular and is surround by water. As a result, \_\_\_\_\_ is an important industry. That is why many people live by the sea. Many goods arrive in countries by sea. That is another reason why cities are near the coast in Sweden.