
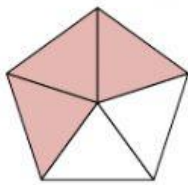


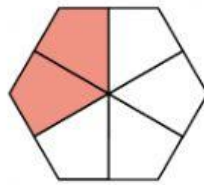
1 SCRIVI LA FRAZIONE



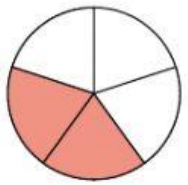
$\frac{4}{5}$



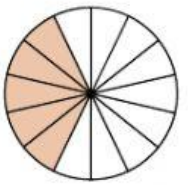
<hr/>



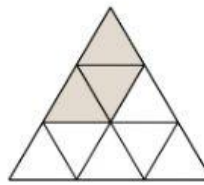
<hr/>



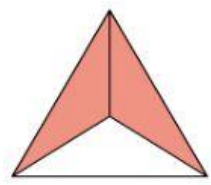
<hr/>



<hr/>



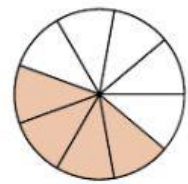
<hr/>



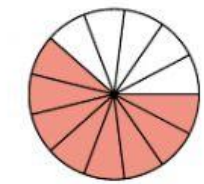
<hr/>



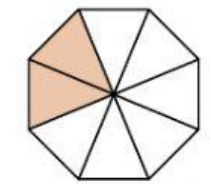
<hr/>



<hr/>



<hr/>



<hr/>
