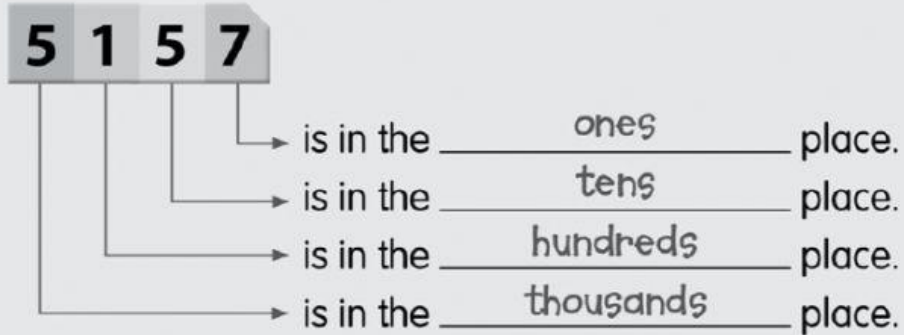



Worksheet 4


- 1 Write the place value of each digit.




example




(a)




(b)



(c)



(d)



2 Fill in the boxes.

(a)



The value of the digit 3 is .

The value of the digit 6 is .

The value of the digit 0 is .

The value of the digit 4 is .

(b)



The value of the digit is 2.

The value of the digit is 5000.

The value of the digit is 80.

The value of the digit is 600.

(c)



The digit 9 stands for .

The digit 2 stands for .

The digit 3 stands for .

The digit 6 stands for .