

Escuela de Sophia of Caloocan, Inc.

3rd Quarterly Test KINDER 1 SCIENCE


Name: _____ Date: _____ Raw Score: _____

Level: _____ Teacher: T. Jhozel/ T.Geyl Parent's Signature: _____




I. Draw a line to match the correct mother animal to its baby animal.(5pts.)



II. Color the picture RED if it shows the proper care of animals and color it GREEN if it's not. (5 points)



III. Color the correct animal with the given body covering. (4 points)



IV. Encircle (O) the animal that gives each thing on the left. (4 points)

15.			
16.			
17.			
18.			

V. Write T if the statement is true and F if it's false. (4 points)

_____ 19. Cats can live in the water.

_____ 20. We can find starfish under the water.

_____ 21. Sharks can live on land.

22. We can find tigers and elephants in the zoo.

VI. Draw a happy face 😊 if the sentence describes the correct movement of animals and a sad face 😞 if it is incorrect. (5 points)

23. ☐ Goats can fly.
24. ☐ Tigers can walk and run.
25. ☐ Fish can swim under the water.
26. ☐ Snakes can crawl.
27. ☐ Butterflies can hop and jump.

VII. Draw what is asked inside the box. (3 points)

28. pet animal	29. farm animal	30. wild animal