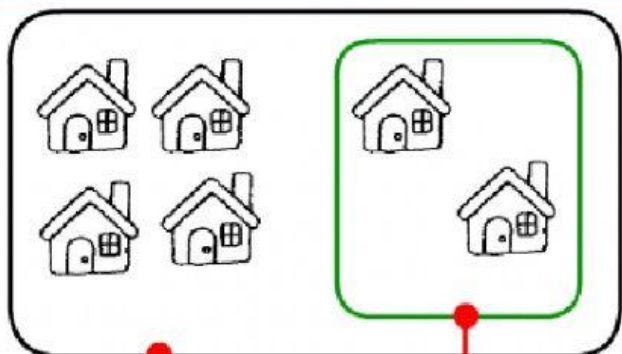


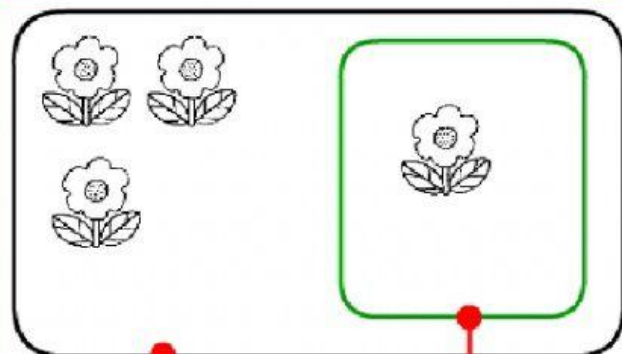
SOTTRAZIONI 1

OSSERVA BENE E SCRIVI LA SOTTRAZIONE



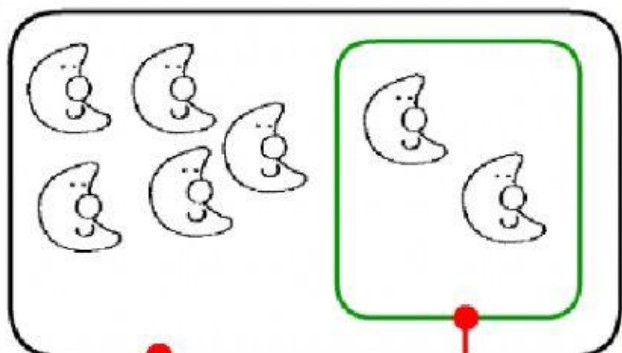
$$\boxed{} - \boxed{} = \dots\dots\dots$$

$$6 - 2 = \dots\dots\dots$$



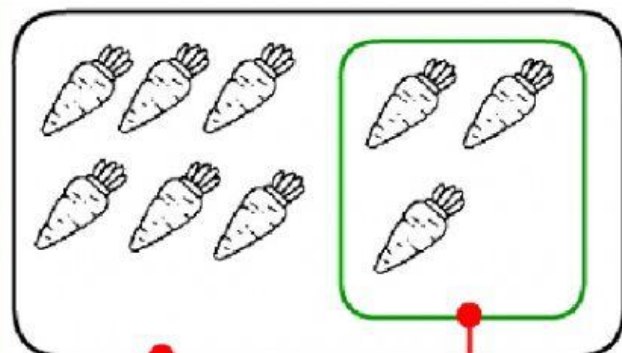
$$\boxed{} - \boxed{} = \dots\dots\dots$$

$$\dots\dots\dots - \dots\dots\dots = \dots\dots\dots$$



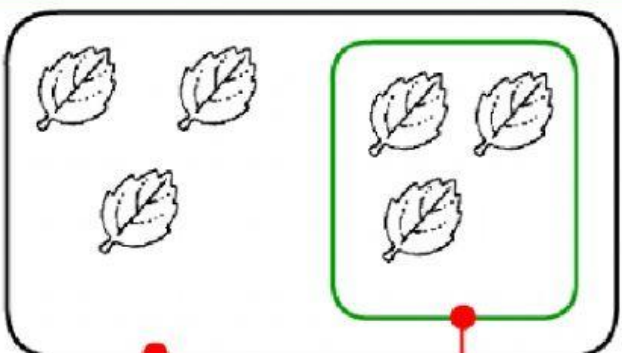
$$\boxed{} - \boxed{} = \dots\dots\dots$$

$$\dots\dots\dots - \dots\dots\dots = \dots\dots\dots$$



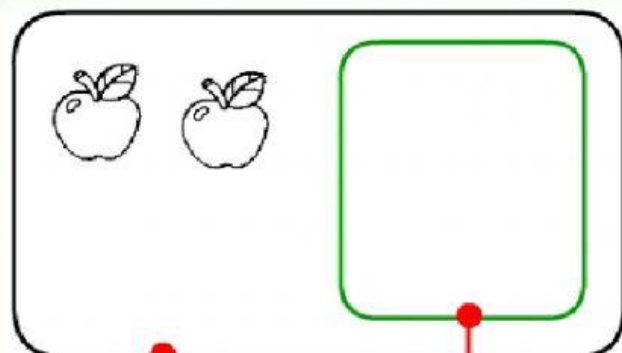
$$\boxed{} - \boxed{} = \dots\dots\dots$$

$$\dots\dots\dots - \dots\dots\dots = \dots\dots\dots$$



$$\boxed{} - \boxed{} = \dots\dots\dots$$

$$\dots\dots\dots - \dots\dots\dots = \dots\dots\dots$$



$$\boxed{} - \boxed{} = \dots\dots\dots$$

$$\dots\dots\dots - \dots\dots\dots = \dots\dots\dots$$