
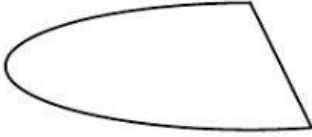


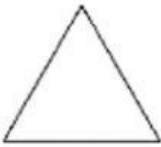

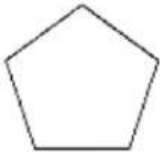
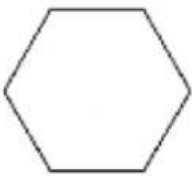

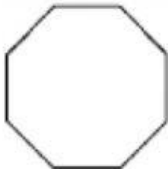


Identifying And Classifying Polygons

Learning Target:

- ☐ BJC 13i I can identify regular and irregular polygons.

<p>Is this shape a polygon?</p> 	<p>Is this shape a polygon?</p> 
<p>Is this shape a polygon?</p> 	<p>Is this shape a polygon?</p> 

 <p>Number of sides: Name:</p>	 <p>Number of sides: Name:</p>	 <p>Number of sides: Name:</p>
 <p>Number of sides: Name:</p>	 <p>Number of sides: Name:</p>	 <p>Number of sides: Name:</p>
<p>The shapes shown above are all _____ polygons.</p>		