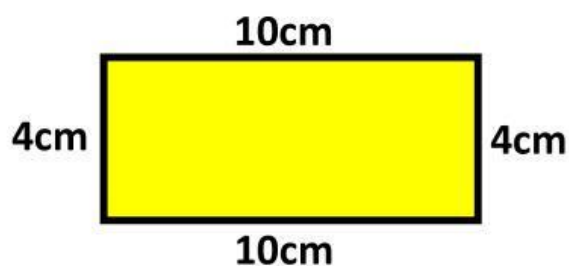
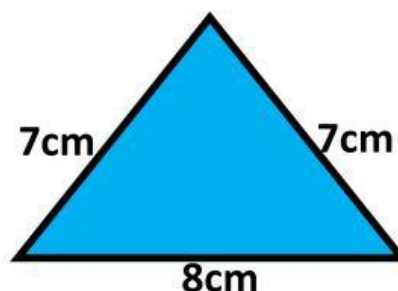


Perimeter

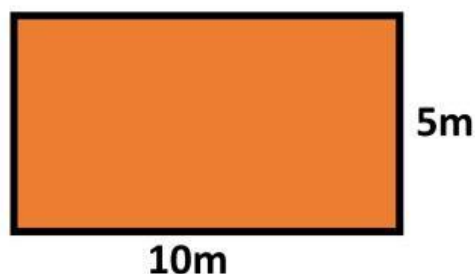
Calculate the perimeter of these shapes.



Perimeter = _____ cm




Perimeter = _____ cm




Perimeter = _____ m

A school playground is in the shape of a square. If the perimeter of the playground is 60m, how long will one side be?

Each side = _____ m



Perimeter = _____ mm

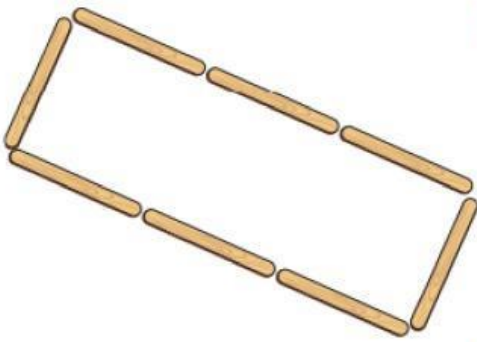


A rectangular swimming pool has a perimeter of 64m. If one of the long sides is 20m, how long are the short sides?

Short side = _____ m


Each lolly stick is 8 cm long.

Find the perimeter of the shape.



Perimeter = _____ cm

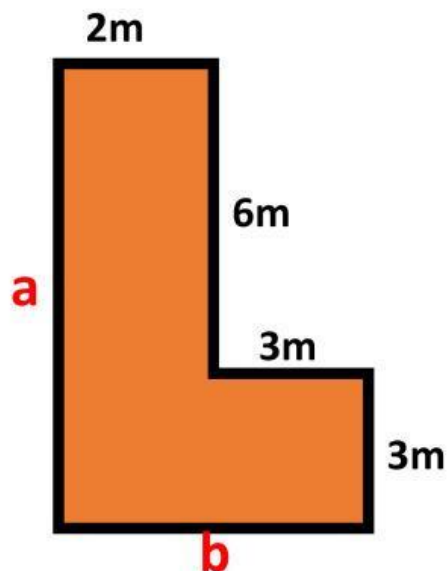
Extension



3.3m

1.5m

Perimeter = _____ m



a = _____ m

b = _____ m

Perimeter = _____ m