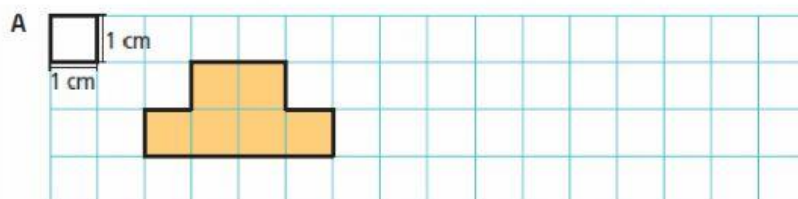


FICHA 15

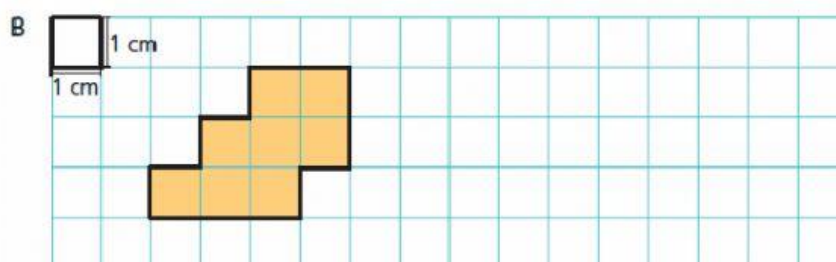
1. Considera como unidade de medida uma quadrícula com 1 cm de lado.

1.1. Regista a área e o perímetro de cada polígono representado.



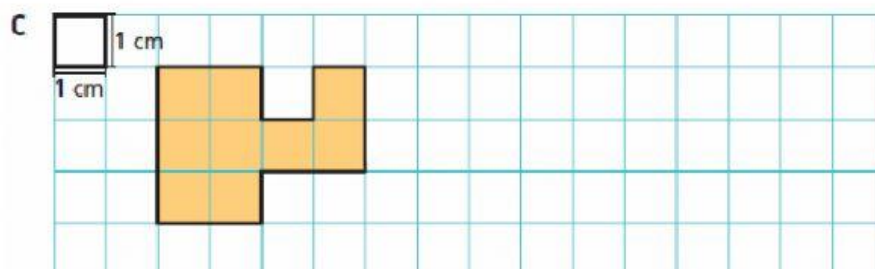
$$A_A = \text{___ cm}^2$$

$$P_A = \text{___ cm}$$



$$A_B = \text{___ cm}^2$$

$$P_B = \text{___ cm}$$



$$A_C = \text{___ cm}^2$$

$$P_C = \text{___ cm}$$