











Part A: My Day at School

Rita made a chart to show her class schedule.

My Day at School		
Subject	Starts	Ends
Reading 	9:00 a.m.	11:00 a.m.
Lunch 	11:00 a.m.	11:30 a.m.
Math 	11:30 a.m.	12:30 p.m.
Social Studies 	12:30 p.m.	1:00 p.m.
Music (Monday) 	1:00 p.m.	1:30 p.m.
Library (Tuesday) 		
Art (Wednesday) 		
Computers (Thursday) 		
Gym (Friday) 		
Science 	1:30 p.m.	2:30 p.m.

Name: _____

1

Look at Rita's schedule.

Which subject does Rita have at the beginning of the day?

Music	Social Studies	Reading
<input type="radio"/>	<input type="radio"/>	<input type="radio"/>

2

Rita has a different class from 1:00 p.m. to 1:30 p.m. every day. She likes going to the class she has on Tuesday at that time.

Which class does Rita like to go to?

- ☐ Science
- ☐ Library
- ☐ Computers

3

Rita spends one hour in Math class, one hour in Science class, and half an hour in Social Studies class. Her two favorite classes are the ones that last the same amount of time.

Which classes are Rita's favorites?

- ☐ Math and Science
- ☐ Social Studies and Math
- ☐ Science and Social Studies