



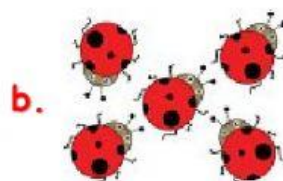

BEREAN CHRISTIAN ACADEMY  
4th Monthly Exam in K -1 Math

I. Directions: Choose the letter of the correct answer.

1. Ben wanted to buy four (4) toy cars. Which of the following corresponds to the number of toy cars?



2. I visited the garden only to find out that there were seven (7) lady bugs destroying my bitter gourd vines. Which of the following corresponds to the number of lady bugs?



3. What is the number word for number 7?

a. seven

b. six

4. My flowers were already blooming and I'd seen six (6) bees sipping nectars from them. Which of the following corresponds to the number of bees?



5. What is the number symbol for N-I-N-E?

a. 8

b. 9

6. What is the number word for number 5?

a. five

b. four

7. There were eight (8) turtles on the seashore. Which of the following corresponds to the number of turtles?



8. What is the number symbol for E-I-G-H-T?

a. 9


b. 8

9. What is the number word for number 10?

a. ten

b. eight

10. Nanay went to the market to buy 10 apples for new year's celebration. Which of the following corresponds to the number of apples?



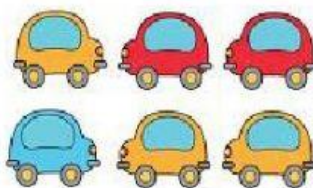
II. Match the group of objects to its number symbol and number word.

4

5

6

7



five

four

six

seven

II. Count the given objects of each group, then drag and drop the number word and number symbol to their given boxes.



eight

10

nine

9

ten

8