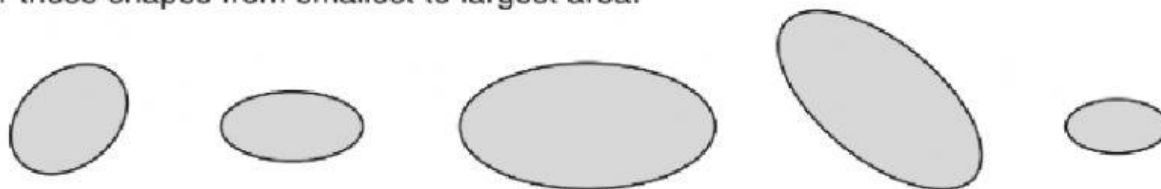


Name: \_\_\_\_\_

Date: \_\_\_\_\_

1. Order these shapes from smallest to largest area.

a.



b.

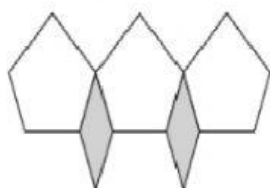


c.



2. Choose the picture of the tessellating pattern.

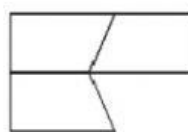
a.



b.



c.



d.



3. What is boundary?

\_\_\_\_\_

4. What is a tessellation?

\_\_\_\_\_

5. What is the area of...? Do de process.

