

## THE CELL, THE THREE LIVE PROCESSES AND THE FIVE KINGDOMS

1. Read and match.

**NUTRITION**

Living things produce similar individuals to themselves.

**REPRODUCTION**

Living things react to what is happening around them

**SENSITIVITY**

Living things obtain nutrients and energy from food

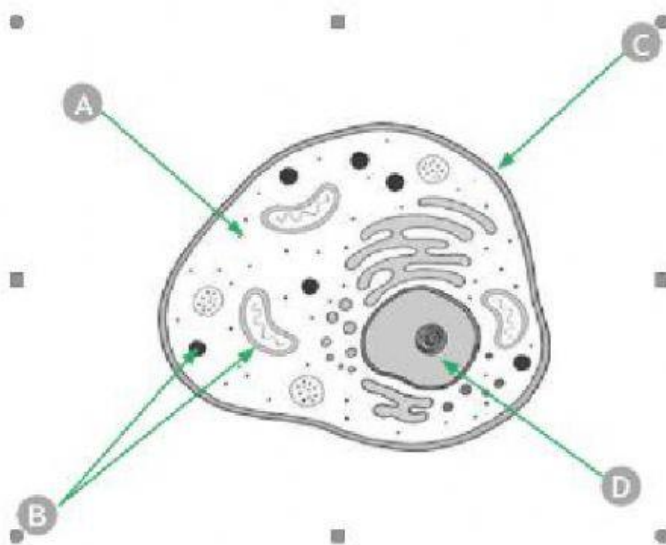
2. Label the picture with the different parts. Use the words in the box

Nucleus

Cytoplasm

Membrane

organelles



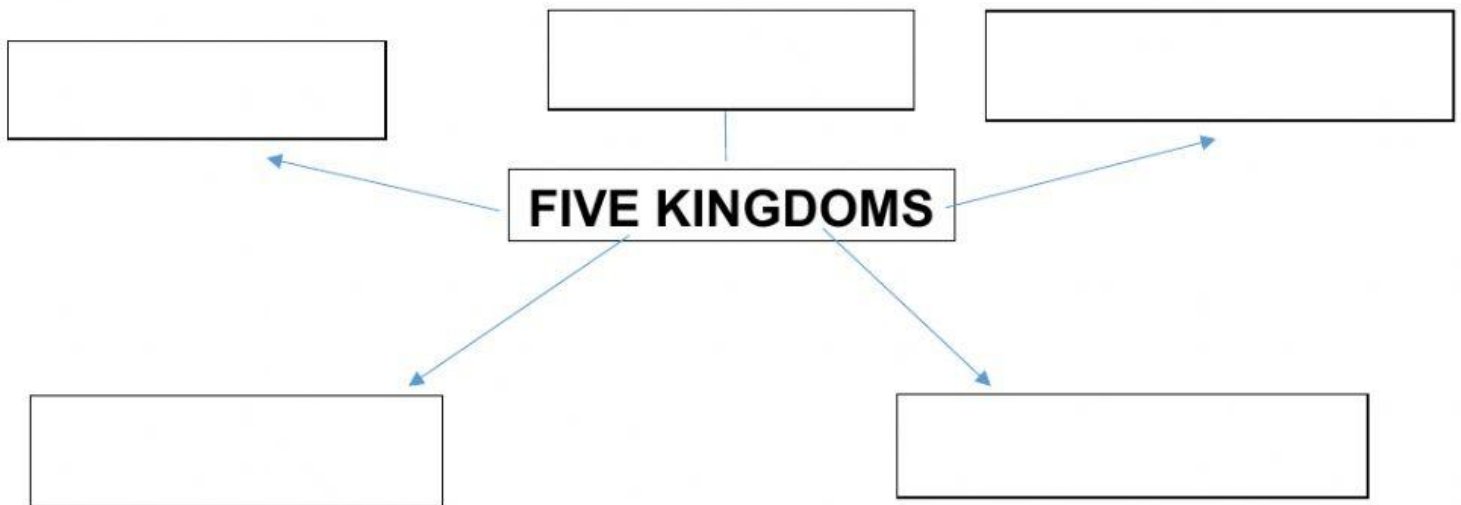
A \_\_\_\_\_

B \_\_\_\_\_

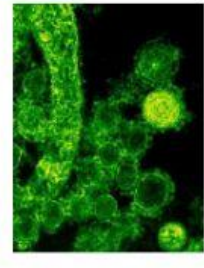
C \_\_\_\_\_

D \_\_\_\_\_

3. Which are the five kingdoms in which living things are classified?



4. Match the kingdom to its characteristic



**FUNGI KINGDOM**

The smallest and simplest of all living things

**ANIMAL KINGDOM**

Consumers

**PLANT KINGDOM**

Includes protozoa and algae.

**BACTERIA KINGDOM**

They cannot move about.

**PROTOCTIST KINGDOM**