


**Worksheet 1: Rotational Symmetry Worksheet**

**Date:** \_\_\_\_\_

**Name:** \_\_\_\_\_ **Class:** \_\_\_\_\_ **Section:** \_\_\_\_\_

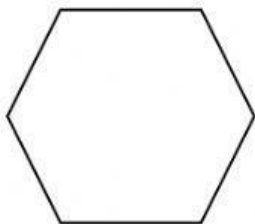
**Direction:** Write the order of turn symmetry of the given shapes

a)




Order of turn symmetry \_\_\_\_\_

b)



Order of turn symmetry \_\_\_\_\_

c)



Order of turn symmetry \_\_\_\_\_

d)



Order of turn symmetry \_\_\_\_\_