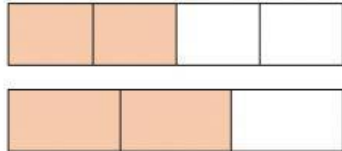


Worksheet (Comparing Fraction)

Name: _____ Class: _____ Date: _____

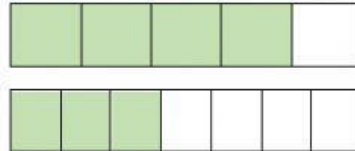
Q. Look at the diagram and write > (greater than), < (less than) or = (equal to) between the fractions.

a)



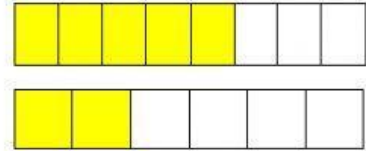
$$\frac{2}{4} < \frac{2}{3}$$

b)




$$\frac{4}{5} > \frac{3}{7}$$

c)



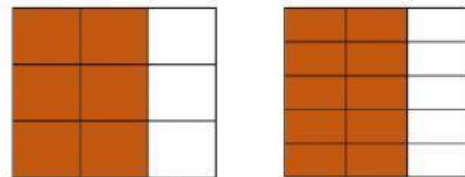
$$\frac{5}{8} < \frac{2}{6}$$

d)



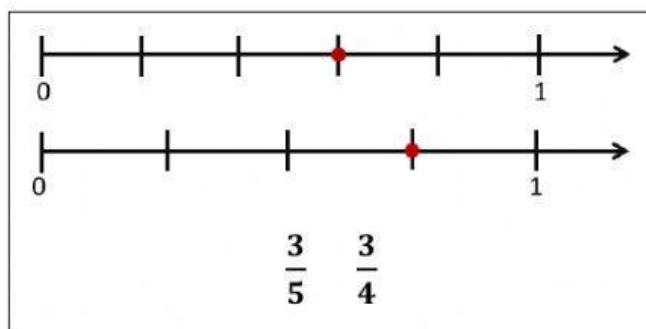
$$\frac{4}{9} < \frac{5}{9}$$

e)



$$\frac{6}{9} < \frac{10}{15}$$

f)



$$\frac{3}{5} < \frac{3}{4}$$