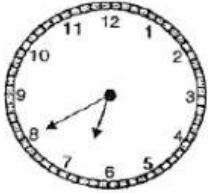







Choose the correct answer


1	<p>Lenny woke up at 7.40. Which clock shows the correct time?</p> <div data-bbox="459 488 1053 907"><div>(1) </div><div>(3) </div><div>(2) </div><div>(4) </div></div>
2.	<p>What is the time shown on the clock?</p> <div data-bbox="646 1064 853 1254"></div> <div data-bbox="406 1265 566 1422"><p>(1) 4.10 (2) 4.50 (3) 5.10 (4) 10.05</p></div>
3	<p>Jack reached his office at the time shown below. What time did he reach office?</p> <div data-bbox="678 1579 901 1803"></div> <div data-bbox="430 1803 574 1948"><p>(1) 1.09 (2) 1.45 (3) 9.01 (4) 9.05</p></div>

4

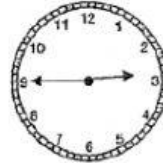
4. Alex, Betty, Cindy and Dan arrived at a party at different times. Who arrived at the party before 2.00?



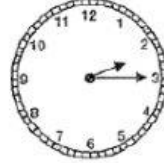
Alex



Betty



Cindy



Dan

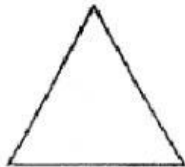
- (1) Alex
- (2) Betty
- (3) Cindy
- (4) Dan

1. Match the names to the correct shapes.



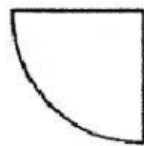
•

• triangle



•

• square



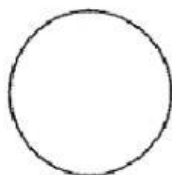
•

• circle



•

• semicircle



•

• quarter circle

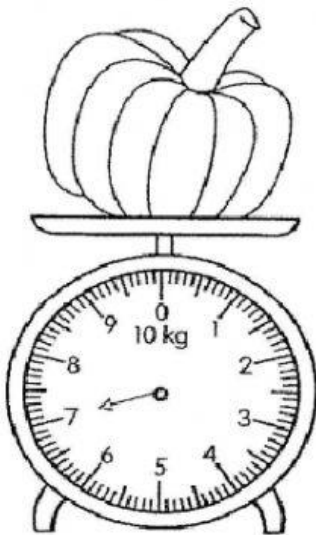


•

• rectangle

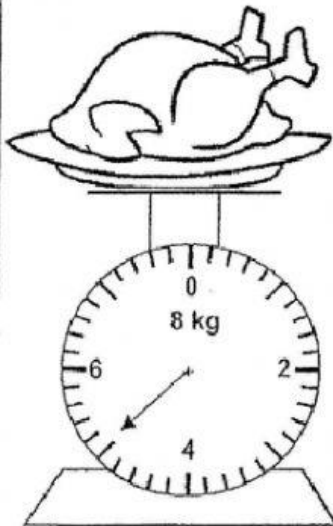
Read each scale. Then, write the mass.

(a) pumpkin



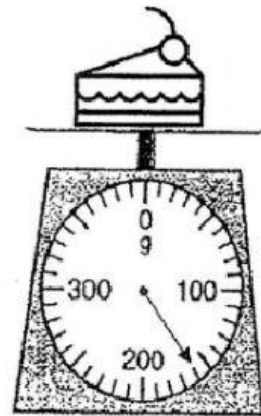
_____ kg

(b) turkey



_____ kg

(c) slice of cake



_____ g

