
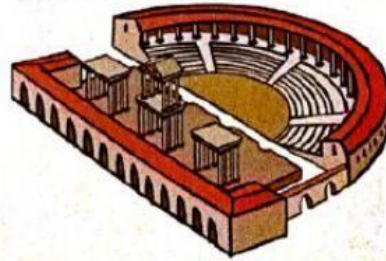

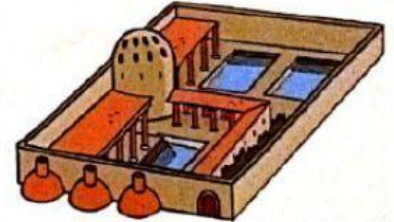

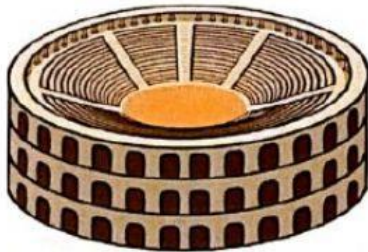


ROMAN CITIES



1 WRITE the names of these parts of the Roman city.



2 READ and CHOOSE.

Roman cities in Hispania were _____.

The most important buildings were in the main square, which they called the _____.

There were many buildings for entertainment. The Romans watched plays at the _____, sports and other performances at the _____ and races

in _____. There were constructions for daily needs.

For example, people went to wash at the _____, and they worshipped Roman gods at the _____. The Romans also built arches, bridges and _____ to transport water.