

## SCIENCE TEST – MAPS AND PLANS

Name: \_\_\_\_\_ class: \_\_\_\_\_

### 1. Read the sentences and write the types of maps:

This map is a flat poster. \_\_\_\_\_

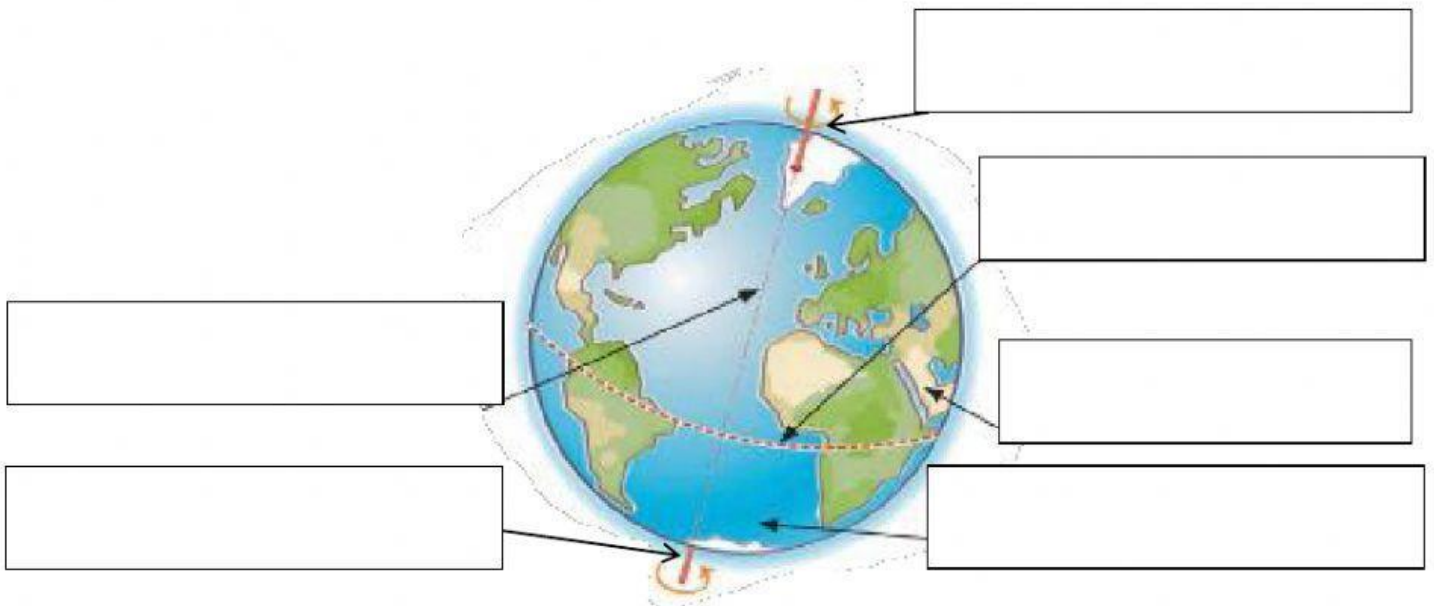
This map is on the internet. \_\_\_\_\_

This map is a book. \_\_\_\_\_

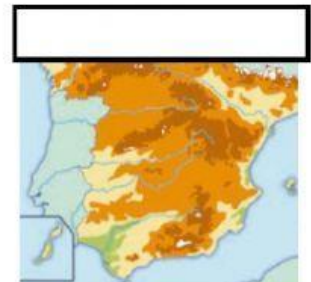
This map spins. \_\_\_\_\_

This map is in cars. \_\_\_\_\_

### 2. Label:



### 3. Write:

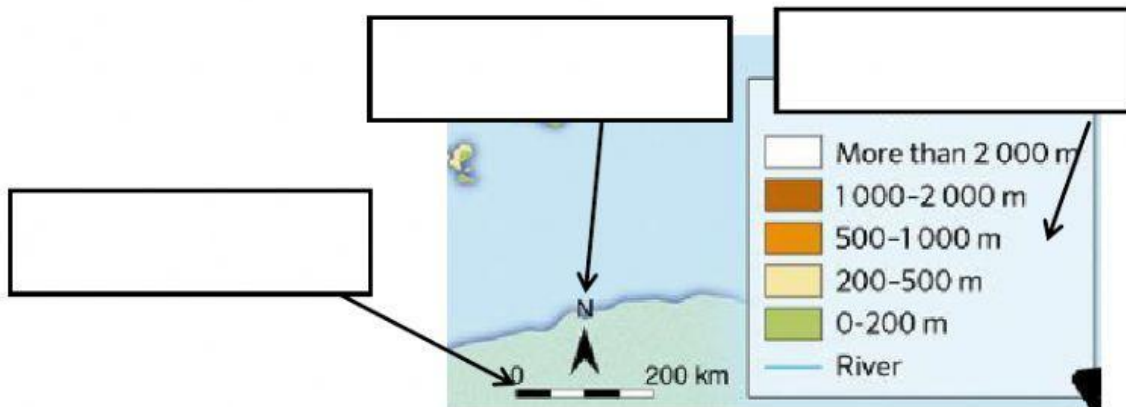


-A \_\_\_\_\_ map shows the different types of roads in different colours. It also shows railway lines and airports.

-A \_\_\_\_\_ map shows high land in brown and low land in green. It shows rivers as blue lines.

-A \_\_\_\_\_ map shows the borders of a country and its different regions. It uses a red dot for the capital city and black dots for the regional capitals.

4. Label the map and complete the sentences with:



- A \_\_\_\_\_ tells us what symbols mean.
- A \_\_\_\_\_ shows us direction.
- A \_\_\_\_\_ helps us understand size.

5. Match the sentences:

A Street map	the size and position of the furniture, doors, windows and walls.
A plan is like a	shows us the names of the streets in a town or city.
Street maps use	map of a room or building.
In a map we can see	symbols.