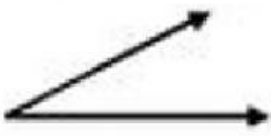
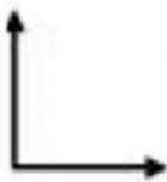
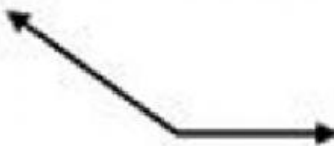





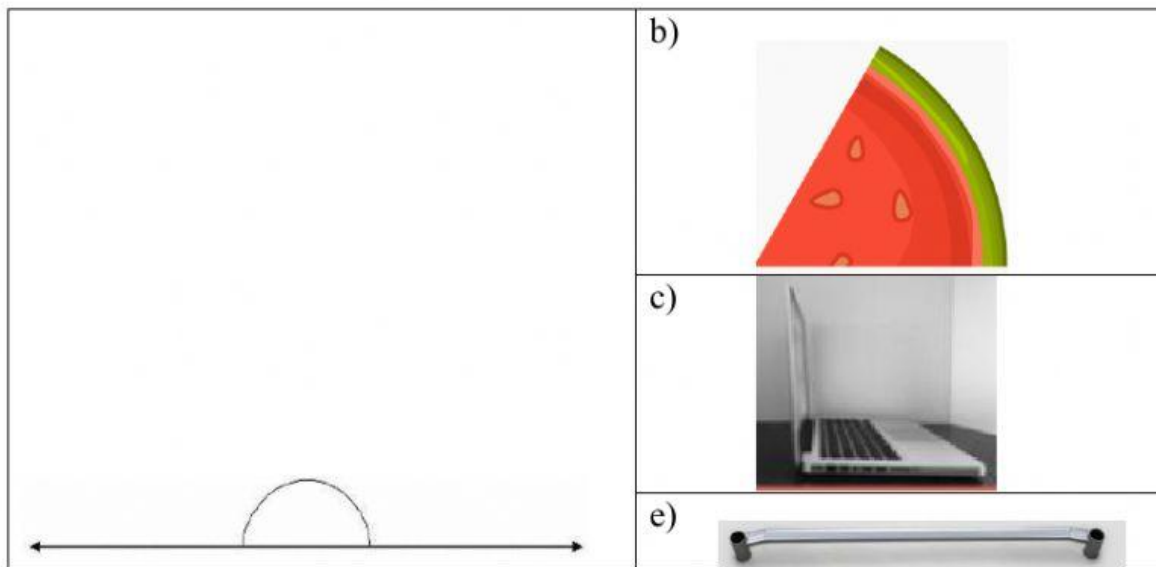


Geometry —Angles

1) Tick the correct angle.

	a) Right angle
	b) Obtuse angle
	c) Straight angle
	e) Acute angle
	a) Exactly 180 °
	b) 90 °
	c) more than 90 ° but less than 180 °
	d) more than 0 ° but less than 90 °
	a) 
	b) 
	c) 
	d) 
	a) 



2) Fill in the blanks.

- When two rays have a common endpoint they form _____.
- The middle letter is always the _____ of the angle.
- Angles that are less than a right angle are called _____ angles.
- Angles that are more than a right angle are called _____ angles.
- Straight angle measures exactly _____ ° degree.

3) Who am I ? Drag the correct option for the answer.

- a) Which angle is measured in me?



- b) What is the angle, measured for my mouth ?



- c) A spider has caught me in its web ? Which angle am I ?



Acute angle

Obtuse angle

Right angle