



RELOJES

MATEMÁTICAS



1. Indica las horas

UNA HORA

10:00	:	:	:	:
-------	---	---	---	---

MEDIA HORA

07:00	:	:	:	:
-------	---	---	---	---

UNA HORA

09:30	:	:	:	:
-------	---	---	---	---

MEDIA HORA

05:30	:	:	:	:
-------	---	---	---	---

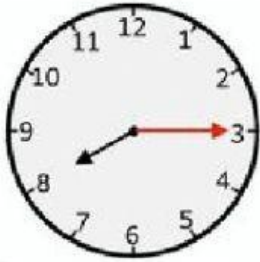
MEDIA HORA

09:00	:	:	:	:
-------	---	---	---	---





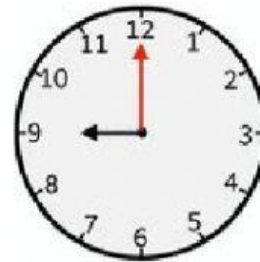
2. ¿Qué hora es?



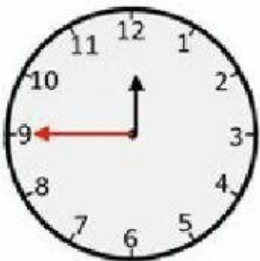
06:30



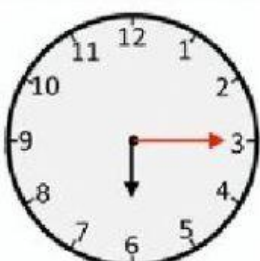
10:00



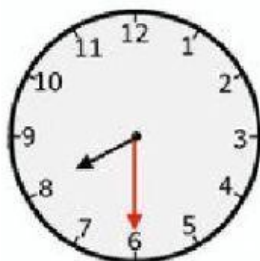
07:15



03:30



11:45



06:15

