

Ortography	/5
Punctuality	/5
1. Identify the influence of the sun and the Moon on some surface of the Earth.	/22
2. Recognize the Moon phases.	/20
3. Identify sun, moon and Earth characteristics	/36
4. Reflect about the influence of the sun and the Moon on some surface of the Earth	/12

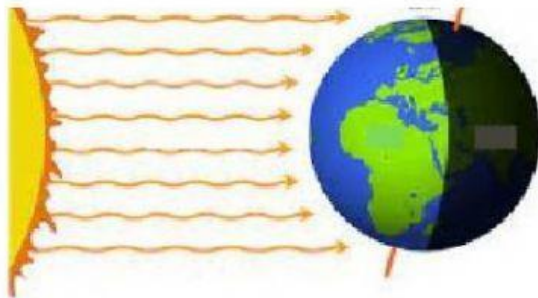
I KNOW ABOUT  
THE SUN AND  
MOON

1. Choose the correct answer and complete the sentences.

The Sun is a

It is the  of the Solar System

VS

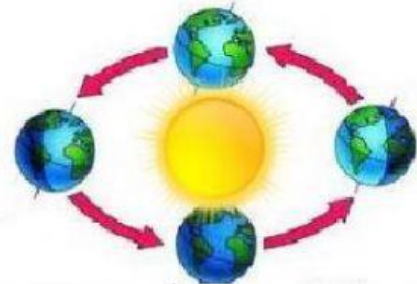


TAKES

or   
hours or days

CAUSES

and



TAKES

or   
days or years

CAUSES



2. Drag the Moon Phases.



The diagram illustrates the moon's orbit around Earth. At the center is a globe of Earth. Four moon phase icons are positioned at the top, bottom, left, and right of Earth, each above an empty blue rectangular box for labeling. The phases shown are:

- Top: First quarter moon (half white, half black)
- Bottom: First quarter moon (half white, half black)
- Left: New moon (empty circle)
- Right: Full moon (solid black)

Yellow arrows indicate a counter-clockwise orbit. A sun icon is located to the right of the Earth. At the top, a legend identifies the phases with colored boxes:

- New moon (green)
- Full moon (yellow)
- First quarter (orange)
- Third quarter (blue)

3. Drag the characteristic to the corresponding place

THE MOON	THE EARTH	THE SUN
		

1 IT HAS GOT WATER AND LAND.

2 IT IS A VERY BIG STAR.

3 IT IS A NATURAL SATELLITE.

4 IT IS AT THE CENTRE OF THE SOLAR SYSTEM.

5 IT IS A SMALL PLANET.

6 IT HAS CRATERS.

7 IT MOVES AROUND THE EARTH.

8 IT MOVES AROUND THE SUN.

9 IT GIVES US HEAT AND LIGHT.

4. Write 3 sentences about what how the sun the moon and the Earth helps you in orientation in time and space.

**REFLECTION**

Blank writing line with a dashed midline for reflection.

Blank writing line with a dashed midline for reflection.

Blank writing line with a dashed midline for reflection.

