
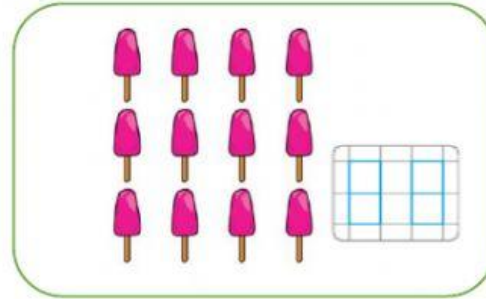
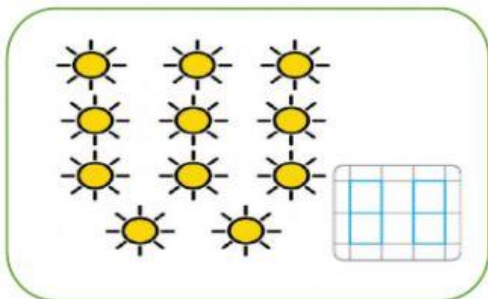
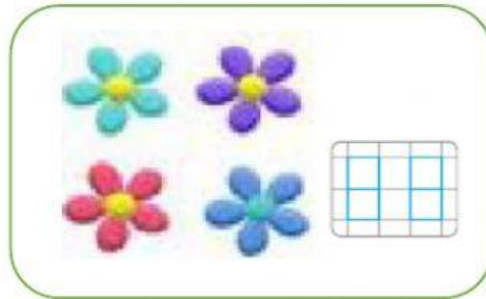
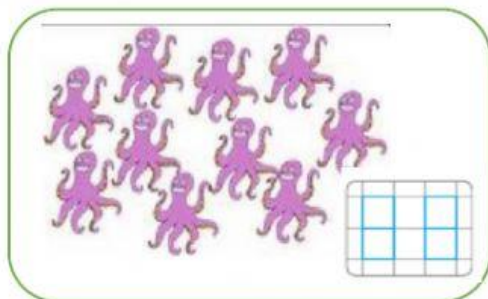


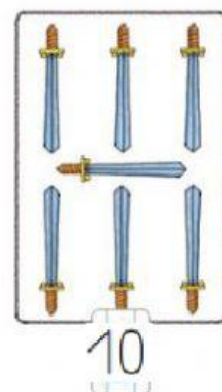


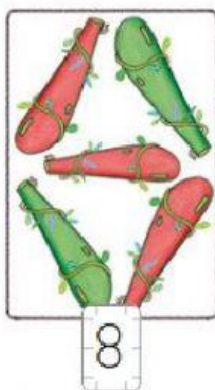
★ Cuenta y escribe el número.



★ Escribe el número de objetos que hay.



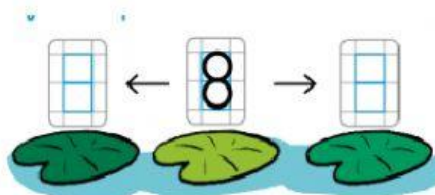
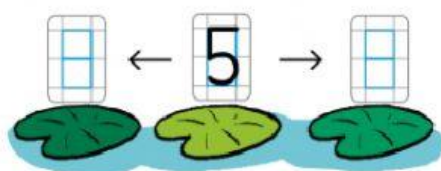
★ Indica si es correcto o no.



★ Completa las series.



★ Escribe el número anterior y el posterior.



★ Realiza las sumas y restas con la ayuda de la recta numérica.



$$5+6 = \boxed{} \quad 7+5 = \boxed{} \quad 8+6 = \boxed{} \quad 9+4 = \boxed{}$$

$$9-2 = \boxed{} \quad 5-2 = \boxed{} \quad 8-3 = \boxed{} \quad 9-5 = \boxed{}$$

★ Escribe los amigos de los siguientes números.

$$9 + \boxed{} = 10 \quad \boxed{} + 4 = 10 \quad 2 + \boxed{} = 10 \quad 7 + \boxed{} = 10$$