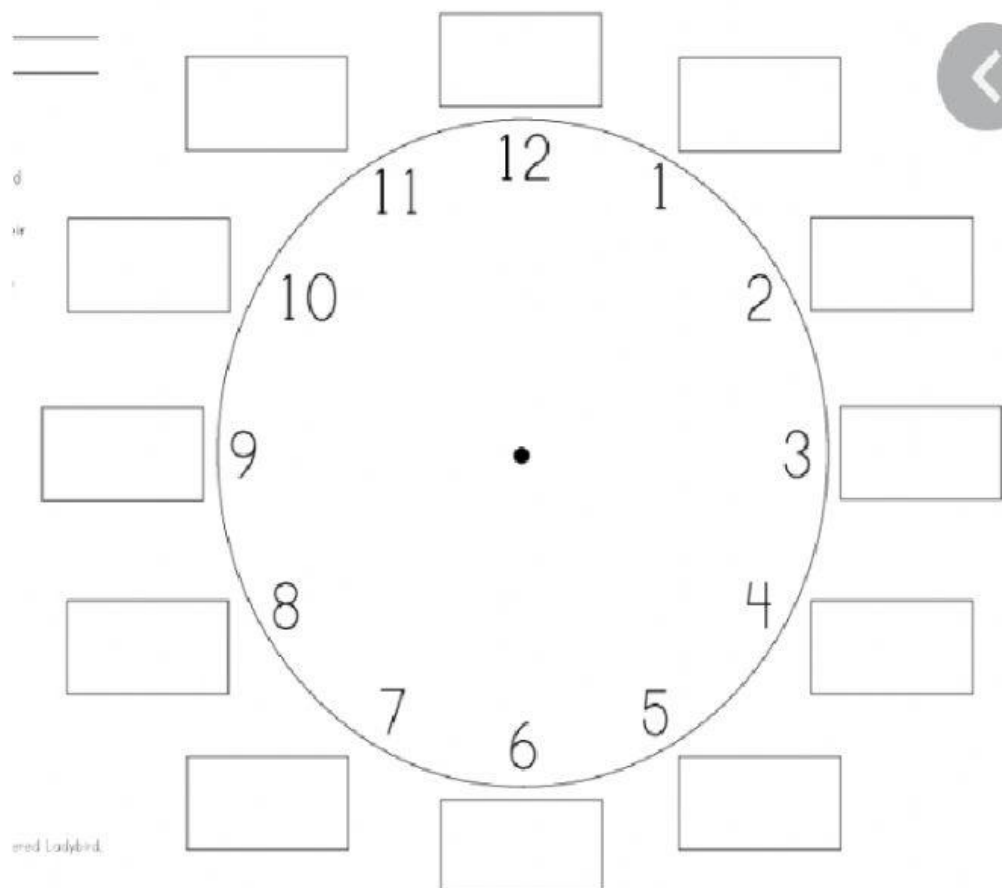


Name: _____ Date: _____

Mathematics

Time

Complete the clock with the correct 24 hour time



A.

Name

Date



CONVERTING 12- TO 24-HOUR CLOCK TIMES SHEET 2

1) Convert these times into 24 hour clock times.

12 hour	24 hour
3:25am	03:25
7:20am	
8:05am	
12:20am	
1:16am	
4:56am	
10:42am	
12:51am	

12 hour	24 hour
3:25pm	
7:20pm	
8:05pm	
12:20pm	
1:16pm	
4:56pm	
10:42pm	
12:51pm	

B.

Write the correct 24 hour clock time with each analogue clock.

Name _____

Date _____



CONVERTING 24- TO 12-HOUR CLOCK TIMES SHEET 2


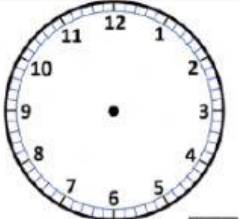
1) Convert these 24-hour times into am and pm times.

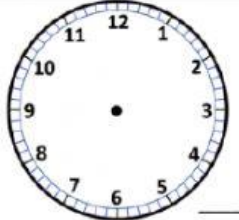
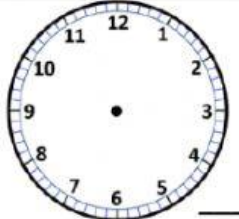
24-hour	12-hour
13:25	1:25pm
10:50	
16:41	
05:37	
12:10	
09:29	
17:02	


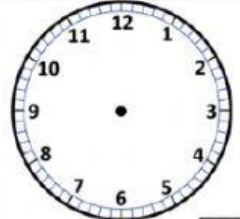
24-hour	12-hour
18:53	
22:05	
07:54	
00:17	
02:50	
21:12	
23:46	

2) Draw the correct time on the clock faces to match the 24 clock time.

Write down 'am' or 'pm' in the bottom corner of each clock.


06:25

18:05


14:50

22:20


00:15

15:55



Free Math Sheets, Math Games and Math Help

MATH-SALAMANDERS.COM

