

Name: _____

Your Graded Worksheet

I. Draw lines to connect the coins to their correct names.



₱ 5




1 ¢

₱ 10

5 ¢

₱ 1

25 ¢



II. Draw lines to connect the bills to their correct names.



₱ 100

₱ 20

₱ 500

₱ 200

₱ 1000

₱ 50

III. Label the money and compare it using <, >, or =.



