

WORDED PROBLEMS

1. Aliyah bought a 7.5 kg pack of sugar. She divided it into smaller packets each containing 250 grams. Each small packet was sold for \$ 8.00. Calculate the amount of money Aliyah earned from selling all the small packets.




7.5 kg








250 g

2. From the diagram below, how far is Joshua from Mikhail's position. Give your answer in metres.










3.The pictograph shows the attendance of pupils in a Standard 5 class over 5days.

Days	Number of Pupils Present
Monday	
Tuesday	
Wednesday	
Thursday	
Friday	

On one day all 18 pupils from the Standard 5 class were present, what is the average number of pupils absent for the 5days?

4. The incomplete pictograph below shows the types of cars owned by teachers in a school.

CARS	NUMBER OF TEACHERS
Aqua	 
Tiida	    
Note	



= 2 teachers

Two more teachers own Note than Aqua. What is the modal vehicle owned by teachers in the school?