

LONGITUDE AND LATITUDE ACTIVITY

Let's remember the key concepts!

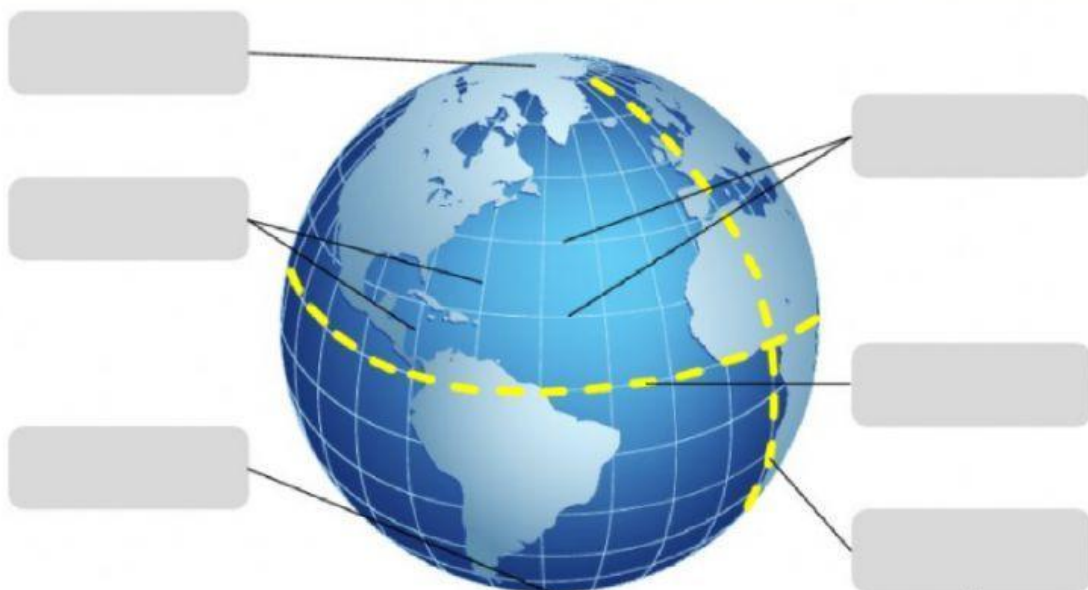
Parallels: are circles parallel to the Equator (lines running east and west).

Meridians: are drawn from the North Pole to the South Pole and are at right angles to the Equator.

Latitude: it is the distance, measured in degrees, that exists between any parallel and the equator.

Longitude: the distance of a point on the Earth counted from a prime meridian.

3. Fill in the blanks with the correct answer.



On the opposite side of the earth from this line is the:

Latitude

Longitude

North Pole

South Pole

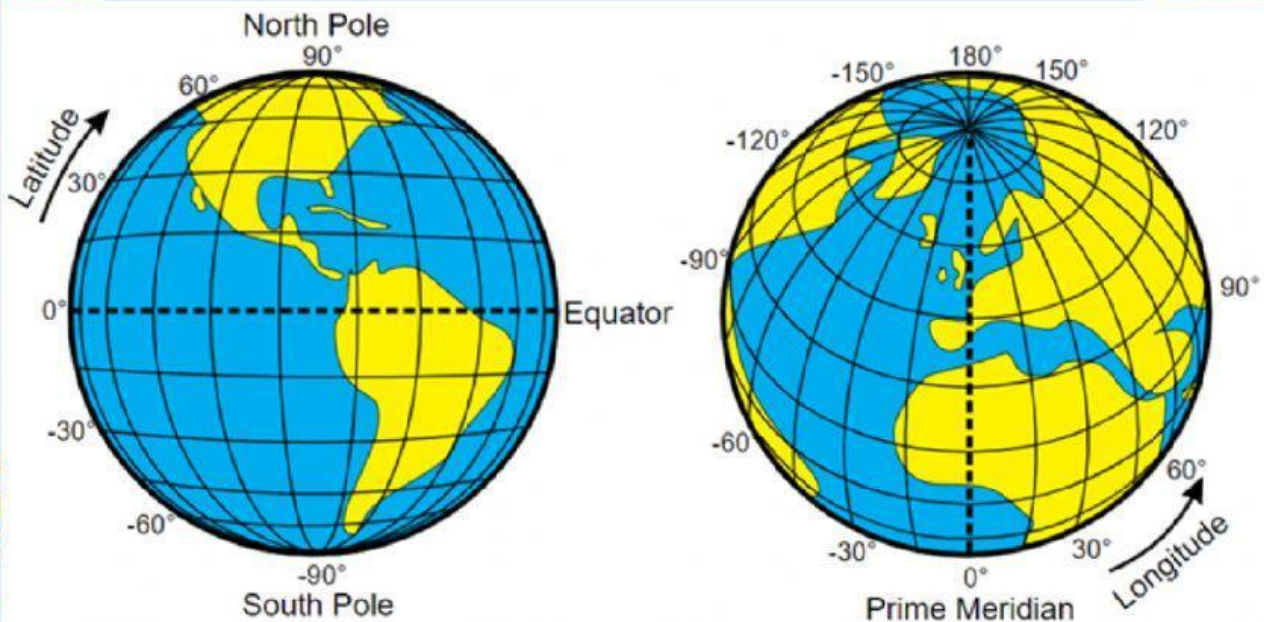
Equator Line

Prime Meridian

International Date Line

By: Valentina Vives

LONGITUDE AND LATITUDE ACTIVITY



Analyze the picture and then choose the correct answer.

4. About the concepts of measuring the earth, we can affirm that.

- a) Parallels are circles parallel to the Equator line.
- b) Meridians are drawn from the North Pole to the South Pole and are at right angles to the Equator.
- c) The Poles are in the East and in the West hemispheres.
- d) A and B are true.



5. Answer (T) if it is true or (F) if it is false.

- If the latitude is North, it means that the analyzed area, is located in the Northern Hemisphere, and if it is South, it means that it is in the Southern Hemisphere. ____
- The prime meridian is also known as the Greenwich meridian or as the meridian 0. ____

By: Valentina Vives

LONGITUDE AND LATITUDE ACTIVITY

6. Draw the boxes into the correct columns



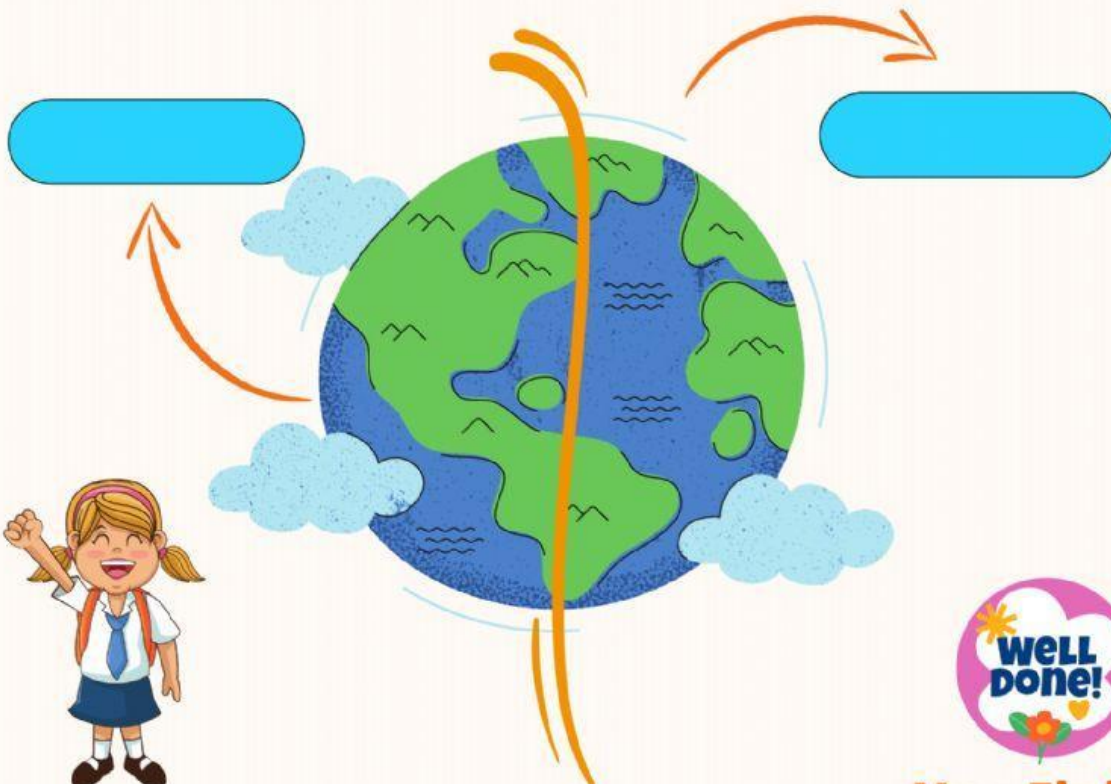
Prime
Meridian

MERIDIANS

Equator
Line

PARALLELS

7. Choose the correct answer



well
done!

You Finish!

By: Valentina Vives