





















# Symbol Sums 1

The total of the symbols in each row are given. Use the total of each row to find the value of each symbol.

				18	 =
				18	 =
				18	 =
				21	 =
21	16	16	22		