



































NOMBRE					
FIGURA					
DURACIÓN	4	2	1	$\frac{1}{2}$ o 0,50	$\frac{1}{4}$ o 0,25
NOMBRE SILENCIO					
FIGURA SILENCIO					

2. REALIZA LAS SIGUIENTES SUMAS TENIENDO EN CUENTA LA DURACIÓN DE LAS FIGURAS O SILENCIOS.

 +  =	 +  =
 +  =	 +  =
 +  =	 +  =
 +  =	 +  =
 +  =	 +  =
 +  =	 +  =
 +  =	 +  =
 +  =	 +  =