




Place Value 10-40


Write how many tens and ones, then write the number.



tens + ones =




tens + ones =





tens + ones =





tens + ones =




tens + ones =



tens + ones =



tens + ones =



tens + ones =

Review: Write the time below each clock.







