


Name: _____

Counting by 2s



a. Find the total number of fish by counting by 2s.







2



4



b. Find the total number of flowers by counting by 2s.



c. Find the total number of crayons by counting by 2s.



d. Find the total number of snails by counting by 2s.

