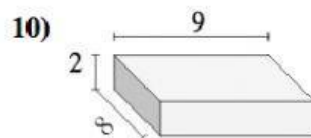
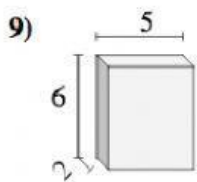
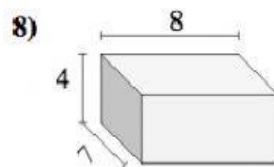
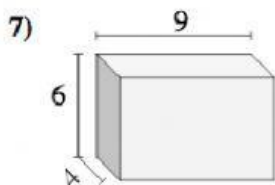
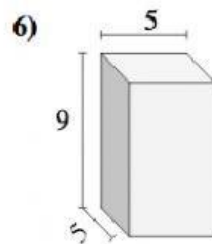
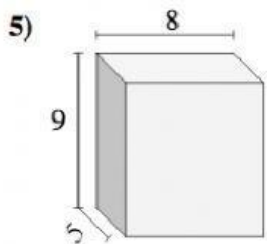
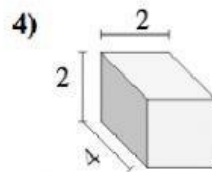
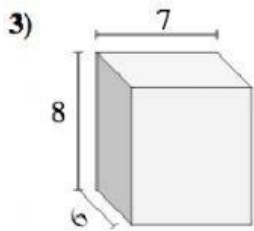
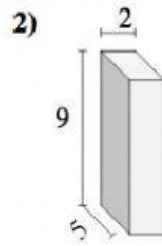
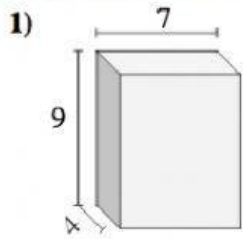




# Encontrando el volumen de prismas Rectangulares

Nombre: \_\_\_\_\_

Encontrar el volumen de cada prisma rectangular. En cm (no estan a escala).



## Respuestas

1. \_\_\_\_\_  $\text{cm}^3$
2. \_\_\_\_\_  $\text{cm}^3$
3. \_\_\_\_\_  $\text{cm}^3$
4. \_\_\_\_\_  $\text{cm}^3$
5. \_\_\_\_\_  $\text{cm}^3$
6. \_\_\_\_\_  $\text{cm}^3$
7. \_\_\_\_\_  $\text{cm}^3$
8. \_\_\_\_\_  $\text{cm}^3$
9. \_\_\_\_\_  $\text{cm}^3$
10. \_\_\_\_\_  $\text{cm}^3$