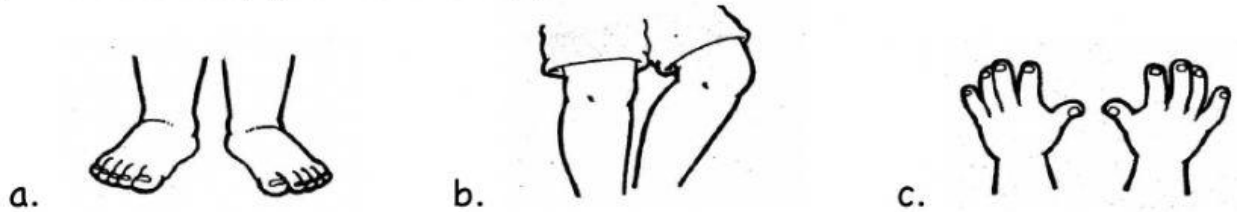




Name: \_\_\_\_\_

**DIRECTIONS:** Write the letter of the correct answer on the box.

\_\_\_\_ 1. Which body part is the legs?




\_\_\_\_ 2. What do you call this body part?


a. eyes                      b. nose                      c. ears



\_\_\_\_ 3. For which body part do you use this




\_\_\_\_ 4. Which activity makes your body NOT clean?



5. Which activity is good for growth?



6. Which of the following smells bad?




7. What is the taste of this food?

a. sweet

b. sour

c. bitter



8. Which texture best describes this object?

a. rough

b. soft

c. smooth




9. What sound does this object make?

a. BOOM! BOOM!

b. MOO! MOO!

c. TICK! TOCK! TICK!



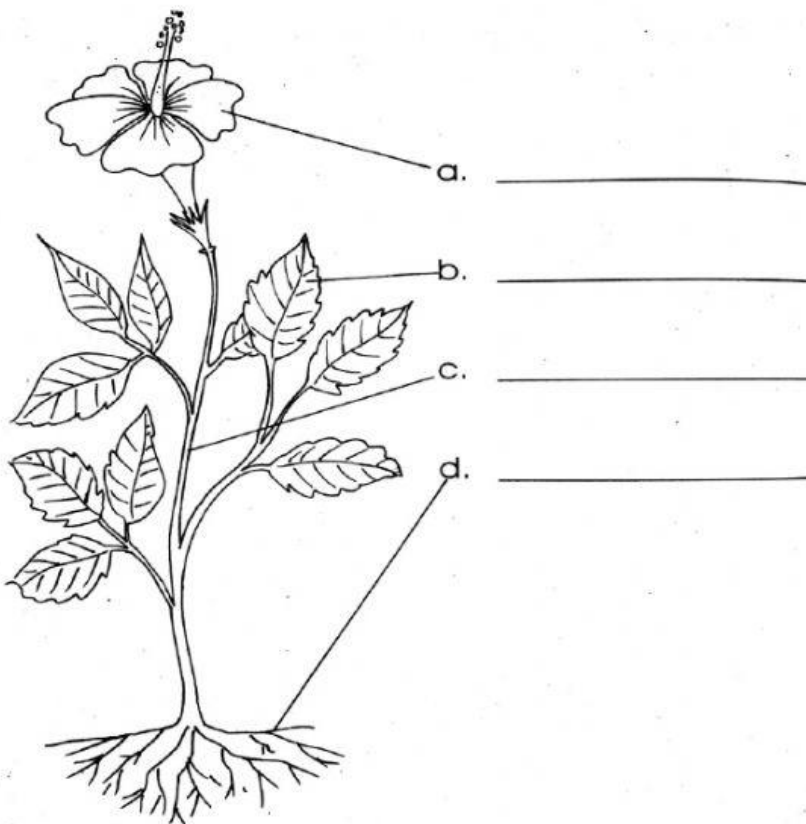


is a nonliving thing.

10.

- a. The sentence above is correct.
- b. The sentence above is not correct.

For number 11-14, label the following parts of the flower by using drag and drop the words on the box to the line to its correct parts.




stem

roots

flower

leaf

15. Which of the following do plants need in order to grow?



- \_\_\_\_ 16. Which of the following plants live on water?  
a. Coconut tree                      b. Tomato                      c. Lotus
- \_\_\_\_ 17. A snake is what kind of animal?  
a. Pets                      b. Farm Animal                      c. Wild Animal
- \_\_\_\_ 18. What does kangaroo, rabbit, and frog have in common?  
a. These animals can crawl.  
b. These animals can fly.  
c. These animals can hop.
- \_\_\_\_ 19. Which of the following sets of animals uses their wings to move?  
a. chicken, cat, fish  
b. dove, rooster, bat  
c. butterfly, dolphin, rabbit
- \_\_\_\_ 20. How many legs does a lizard have?  
a. four legs                      b. two legs                      c. no legs
- \_\_\_\_ 21. What is the name of a baby kangaroo?  
a. wriggler                      b. joey                      c. kid
- \_\_\_\_ 22. Where does an alligator live?  
a. on land                      b. on water                      c. land and water
- \_\_\_\_ 23. If monkeys have hair, what does a fish have?  
a. shell                      b. feathers                      c. scales
- \_\_\_\_ 24. Which picture gives you the liquid state of matter?


a.



b.



c.





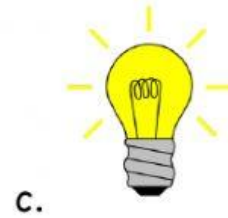
\_\_\_\_ 25. Which category does a radio belong to?

a. heat

b. light

c. sound

\_\_\_\_ 26. Which of the following needs electricity to work?



\_\_\_\_ 27. Which of the following cannot move by themselves?



\_\_\_\_ 28. What can make a safety pin move?

a. water

b. electricity

c. magnet

\_\_\_\_ 29. Do we push or pull?

a. Push

b. Pull



\_\_\_\_ 30. When it's sunny outside, we cannot do this thing.

