

Name : \_\_\_\_\_

Score : \_\_\_\_\_

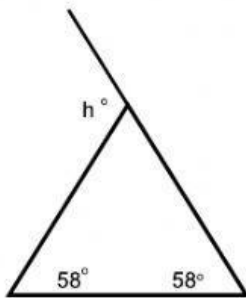
Teacher : \_\_\_\_\_

Date : \_\_\_\_\_

### Exterior Angle Theorem

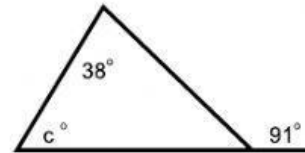
Solve for the given variable.

1)



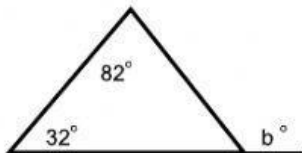
$h = \underline{\hspace{2cm}}$

5)



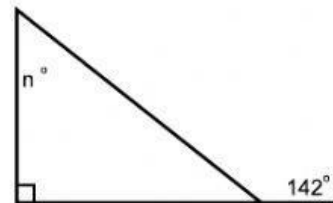
$c = \underline{\hspace{2cm}}$

2)



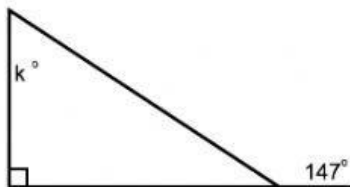
$b = \underline{\hspace{2cm}}$

6)



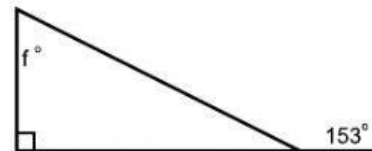
$n = \underline{\hspace{2cm}}$

3)



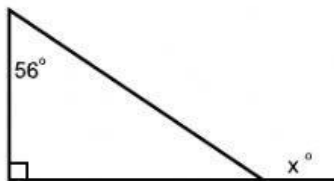
$k = \underline{\hspace{2cm}}$

7)



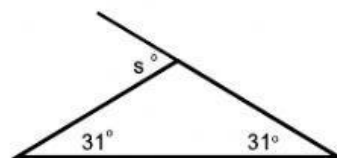
$f = \underline{\hspace{2cm}}$

4)



$x = \underline{\hspace{2cm}}$

8)



$s = \underline{\hspace{2cm}}$

