

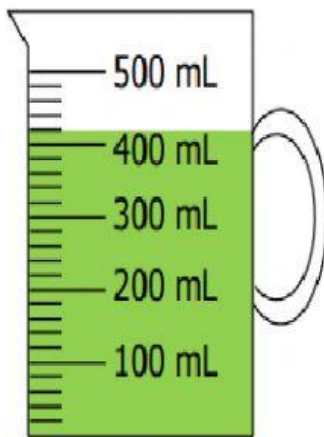


# Codeyoung

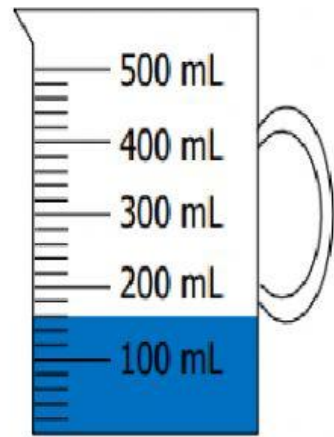
## Measure capacity and perform operations on capacity

### Capacity Measurement

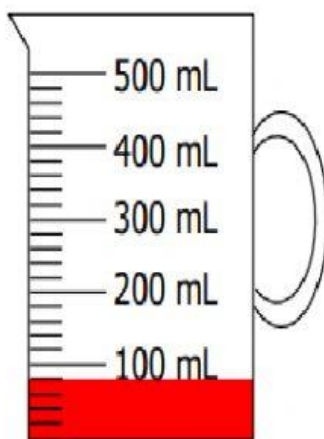
Find the volume of the juice in milliliters (mL) in the following measuring cups.



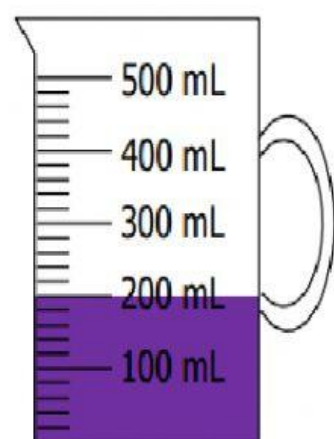
1) \_\_\_\_\_ mL



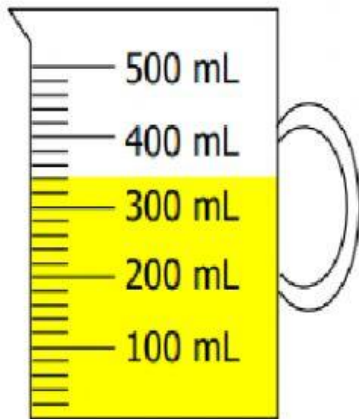
2) \_\_\_\_\_ mL



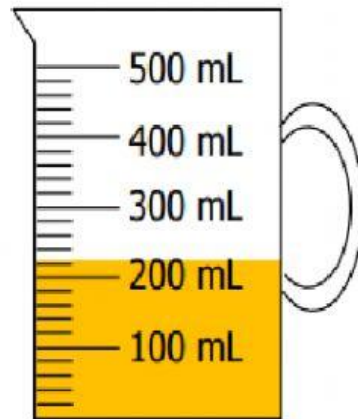
3) \_\_\_\_\_ mL



4) \_\_\_\_\_ mL









5) \_\_\_\_\_ mL



6) \_\_\_\_\_ mL

**Does it hold more or less than 1 gallon? Choose the correct answer.**

Hint: 1 gallon = 16 US cups

<p>A coffee cup</p> 	<p>A teapot</p> 	<p>A bathtub</p> 
Less than / More than	Less than / More than	Less than / More than
<p>A tube of sunscreen</p> 	<p>A mug</p> 	<p>A yogurt cup</p> 
Less than / More than	Less than / More than	Less than / More than