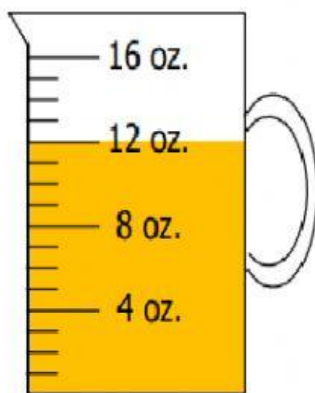




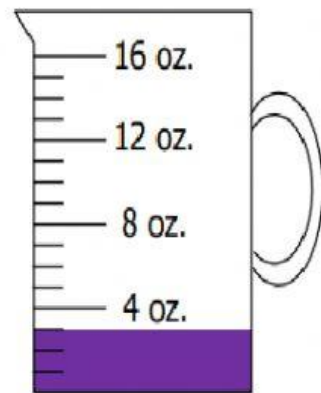
Measure capacity and perform operations on capacity

CW _ Capacity Measurement

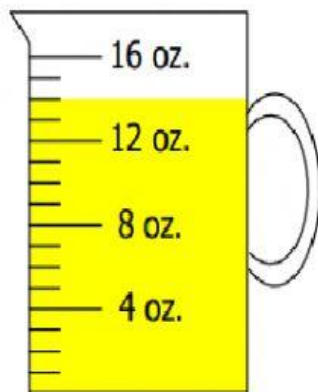
Find the volume of the juice in the following measuring cups.



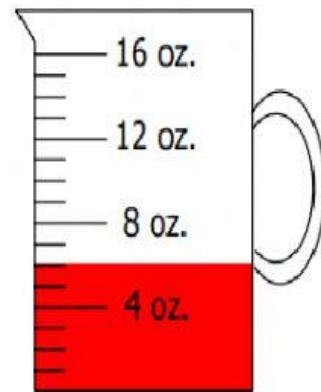
1) _____ oz.



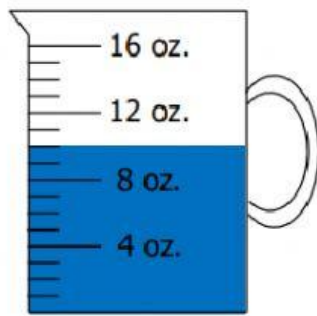
2) _____ oz.



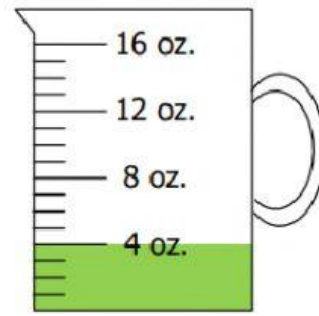
3) _____ oz.



4) _____ oz.



5) _____ oz.



6) _____ oz.

Does it hold more or less than 1 gallon? Choose the correct answer.

Hint: 1 gallon = 16 cups

<p>A bottle of hand soap</p> 	<p>A swimming pool</p> 	<p>A salt shaker</p> 
<p>Less than / More than</p>	<p>Less than / More than</p>	<p>Less than / More than</p>
<p>A backpack</p> 	<p>A glass</p> 	<p>An aquarium</p> 
<p>Less than / More than</p>	<p>Less than / More than</p>	<p>Less than / More than</p>