

Content HW_Grade-5_Decimals

Expanded Form of & Place Value in Decimals

1. Write the place of the red digit.
Then write its value.

1. 2.31

2. 0.49

3. 62.75

4. 11.38

5. 129.04

6. 21.59

7. 5.04

8. 30.03

9. 25.15

10. 53.96

11. 4.10

12. 8.56

13. 509.88

14. 9.14

15. 18.03

2. Write in expanded form.

1) 689.435 _____

2) 24.17 _____

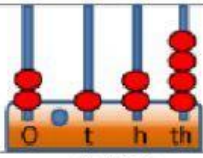
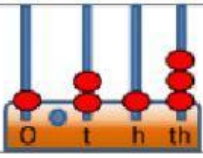
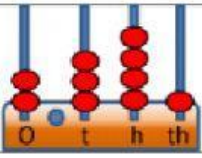
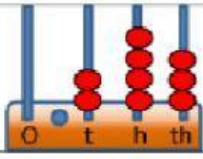
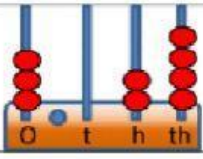
3) 36.9 _____

4) 1.824 _____

5) 709.63 _____

6) 8.6 _____

3. Use the abacus to work out the numbers shown.

<p>1)</p>  <p>= 2.124</p>	<p>2)</p> 	<p>3)</p> 
<p>4)</p> 	<p>5)</p> 	<p>6)</p> 