







Name: _____

AMPHIBIANS AND REPTILES

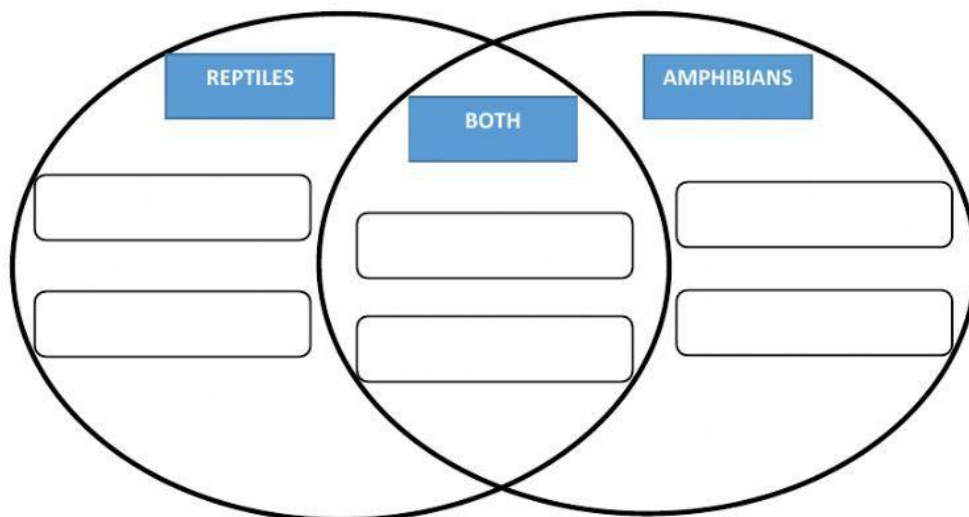


1. Study the pictures below. Decide whether the following animals are amphibians or reptiles.

<p>salamander</p>  <input type="text"/>	<p>newt</p>  <input type="text"/>	<p>iguana</p>  <input type="text"/>
<p>alligator</p>  <input type="text"/>	<p>tortoise</p>  <input type="text"/>	<p>toad</p>  <input type="text"/>

2. Fill in the Venn diagram with the information below.

dry, scaly skin	cold blooded	lay eggs on land
are vertebrates	lay eggs in water	smooth, moist skin



3. Choose the correct order of the stages of a frog's life cycle.

