

Name: _____


MEASURING LENGTH AND HEIGHT




Instructions: Count the paperclips to tell the length and the height of each picture.



_____ paperclips long



_____ paperclips long



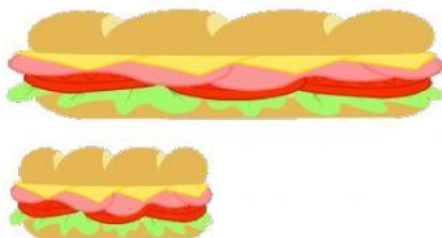
_____ paperclips high



_____ paperclips high

Instructions: Choose the correct answers.

5. Which sandwich is shorter?



6. Which tree is lower?



7. Which hotel is higher?



8. Which shoe is longer?

