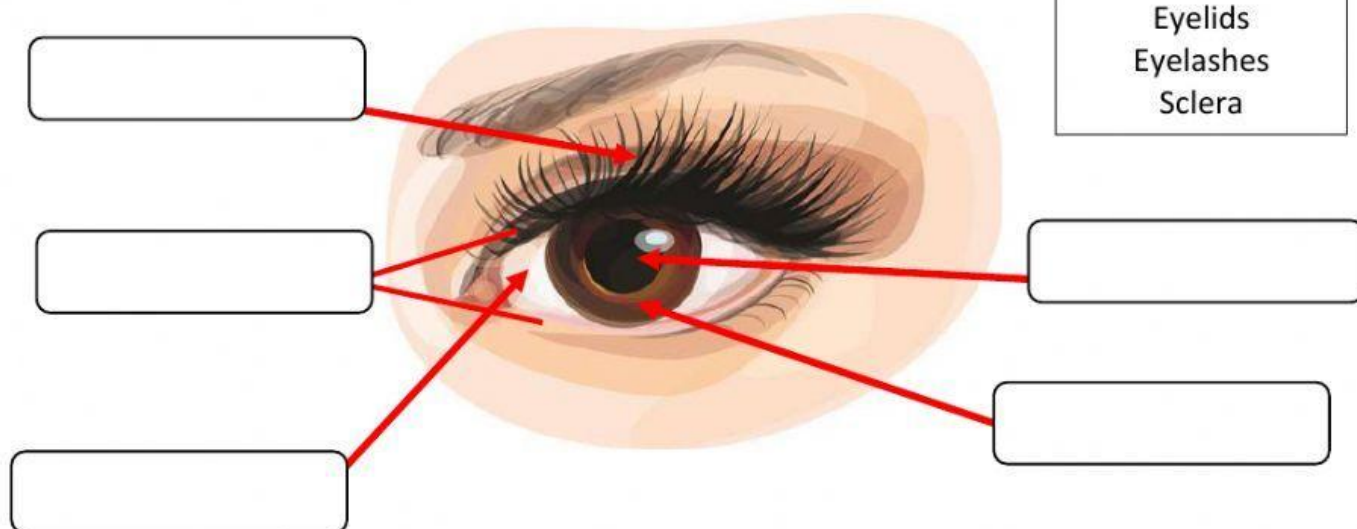




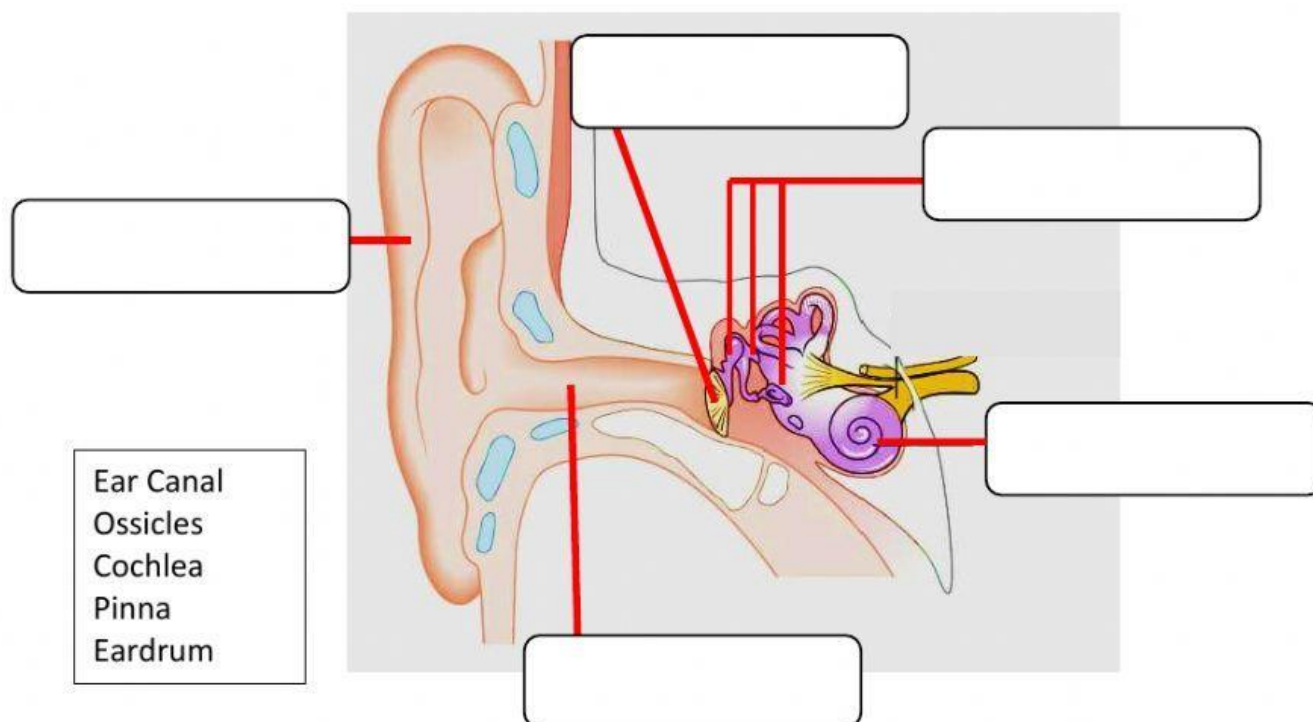
- I. Label the parts of the eyes, ears and skin. Choose your answer from the word bank.

A. Parts of the Eyes



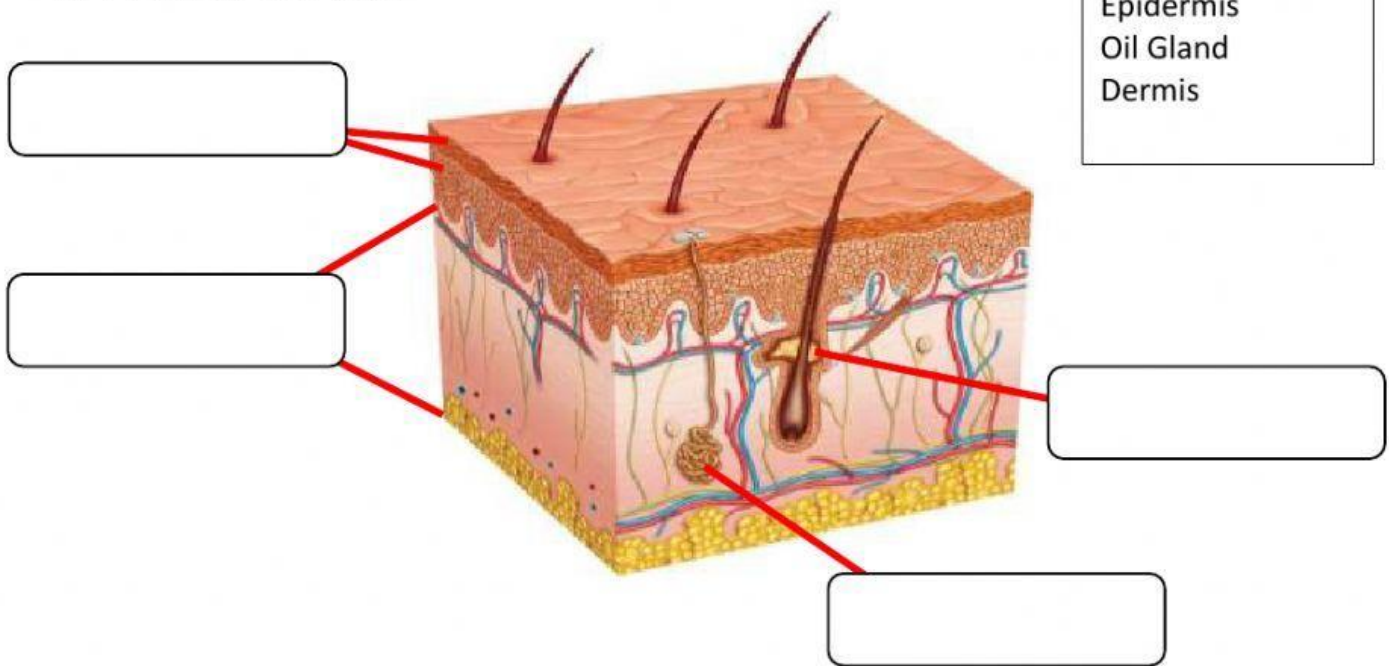
Pupil  
Iris  
Eyelids  
Eyelashes  
Sclera

B. Parts of the Ears



Ear Canal  
Ossicles  
Cochlea  
Pinna  
Eardrum

### C. Parts of the Skin



Sweat Gland  
Epidermis  
Oil Gland  
Dermis

II. Read and identify the given statements. Write your answer on the space provided.

\_\_\_\_\_

-----

\_\_\_\_\_

-----

\_\_\_\_\_

-----

\_\_\_\_\_

-----

\_\_\_\_\_

-----

\_\_\_\_\_

-----

1. It is a clear layer at the front center of the eye.
2. It is the internal part of the eyes which sends signal to the brain about the things that you see.
3. It is the part of the ears that looks like a shell of a snail.
4. It picks up the sound messages and sends them to the brain.
5. It divides the nose into two openings called nostrils.
6. It is the part of the skin where perspiration or sweat is produced.

Sweat gland	Cornea	Optic Nerve	Cochlea	Auditory Nerve	Nasal Bone
-------------	--------	-------------	---------	----------------	------------