




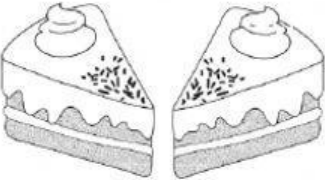

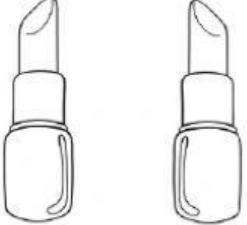
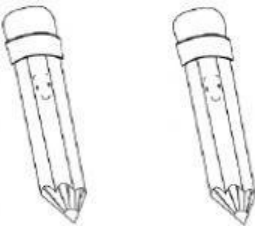

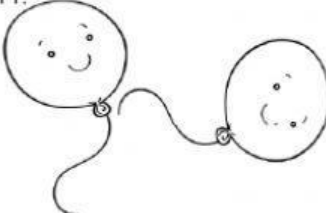
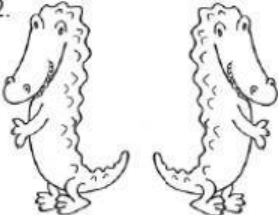
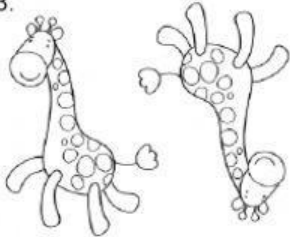
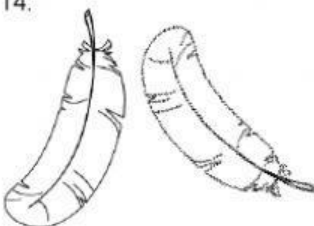
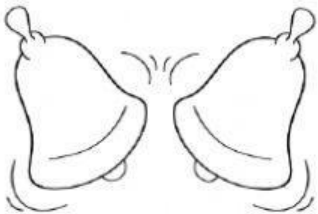
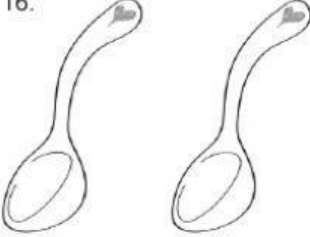
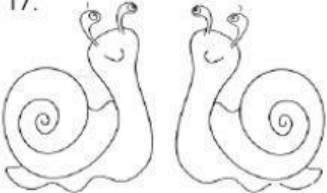




Flips, Slides, Turns

Name: _____

Remember that figures that are the same size and shape are *congruent*. We can test whether two figures are congruent in a few ways. Those ways are flips (reflection), slides (translation) and turns (rotation).

Look at the following figures and decide whether there has been a flip, a slide or a turn.

1. 	2. 	3. 	4. 
5. 	6. 	7. 	8. 
9. 	10. 	11. 	12. 
13. 	14. 	15. 	16. 
17. 	18. 	19. 	20. 