



Choose the correct answer.

1. It is drawn in one direction and does not bend.      a. straight line      b. curved lines
2. It is drawn in different directions and can be bent.      a. straight line      b. curved lines

3.       a. vertical line      b. diagonal line


4.       a. convex line      b. concave line

5.       a. spiral line      b. wavy line

6.       a. horizontal line      b. vertical line

7.       a. convex line      b. concave line

8.       a. wavy line      b. spiral line

9.       a. horizontal line      b. spiral line

10.       a. spiral line      b. wavy line