









## Groups and arrays (Multiplication)

**Objective:** To write the multiplication sums by using the given arrays.

**Instructions:** Look at the given arrays and write multiplication sums for each of them.  
Use the concept of rows and columns as shown in the video.

 <input type="text"/> x <input type="text"/> = <input type="text"/>	 <input type="text"/> x <input type="text"/> = <input type="text"/>
 <input type="text"/> x <input type="text"/> = <input type="text"/>	 <input type="text"/> x <input type="text"/> = <input type="text"/>
 <input type="text"/> x <input type="text"/> = <input type="text"/>	 <input type="text"/> x <input type="text"/> = <input type="text"/>