



Concept HW_Grade-3_Multiplication and Division

Understanding Division using Visual Models


Complete the given multiplication and division sentences for given models.



$$\boxed{} \times \boxed{} = \boxed{}$$


$$\boxed{} \div \boxed{} = \boxed{}$$


$$\boxed{5} \times \boxed{2} = \boxed{}$$

$$\boxed{10} \div \boxed{2} = \boxed{}$$


$$\boxed{} \times \boxed{5} = \boxed{}$$

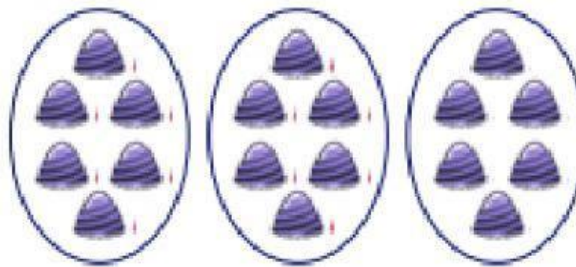
$$\boxed{} \div \boxed{} = \boxed{4}$$



$$\square \times \square = \square$$

$$\square \div \square = \square$$

$$\square \div \square = \square$$



$$\square \times \square = \square$$

$$\square \div \square = \square$$

$$\square \div \square = \square$$